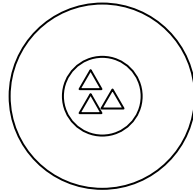
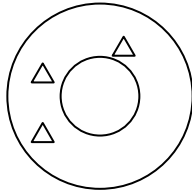


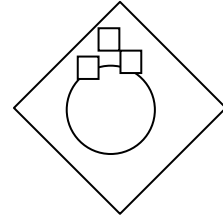
Accuracy and Measurement - Matching Worksheet

the letter of the answer that matches the problem.

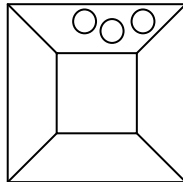
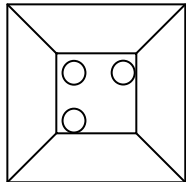
1. Which one has low accuracy and low precision?



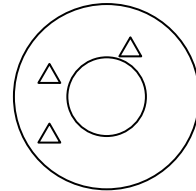
a.



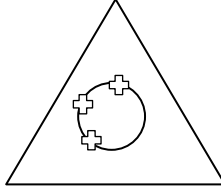
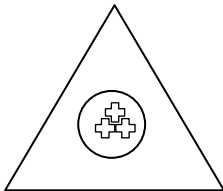
2. Which one has high accuracy and low precision?



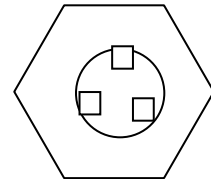
b.



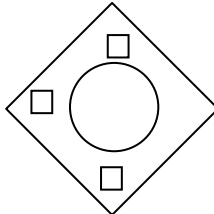
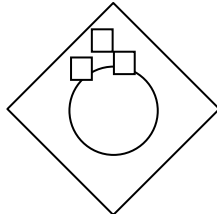
3. Which one has high accuracy and high precision?



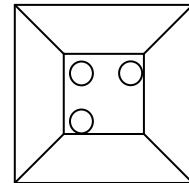
c.



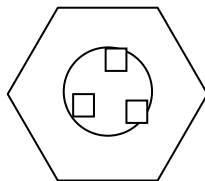
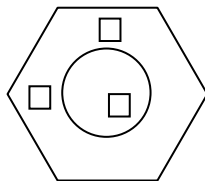
4. Which one has low accuracy and high precision?



d.



5. Which one has high accuracy and low precision?



e.

