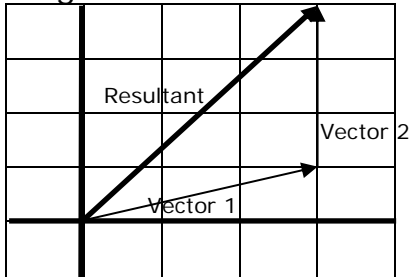


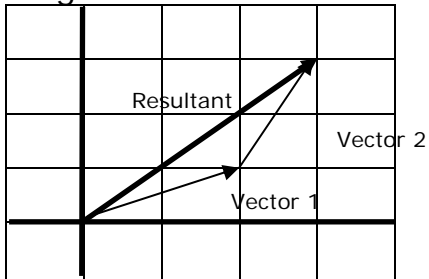
Adding Vectors End to End - Matching Worksheet

Find the sum of each pair of vectors (the magnitude of the resultant vector).

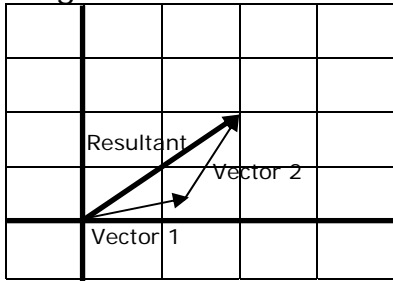
1. Find the sum of each pair of vectors (the magnitude of the resultant vector). a. 4.24



2. Find the sum of each pair of vectors (the magnitude of the resultant vector). b. 2.82



3. Find the sum of each pair of vectors (the magnitude of the resultant vector). c. 5.65



4. Find the sum of each pair of vectors (the magnitude of the resultant vector). d. 5

