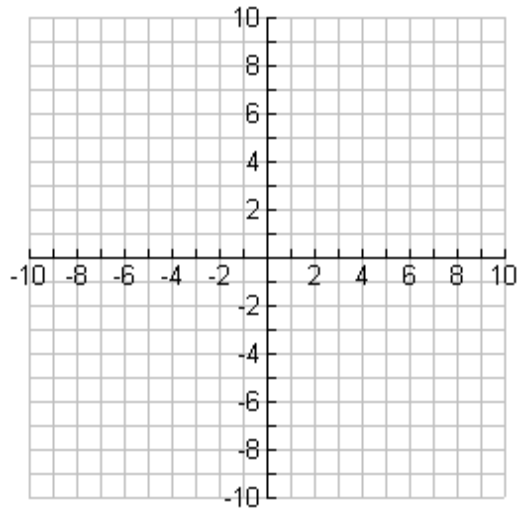


Name _____

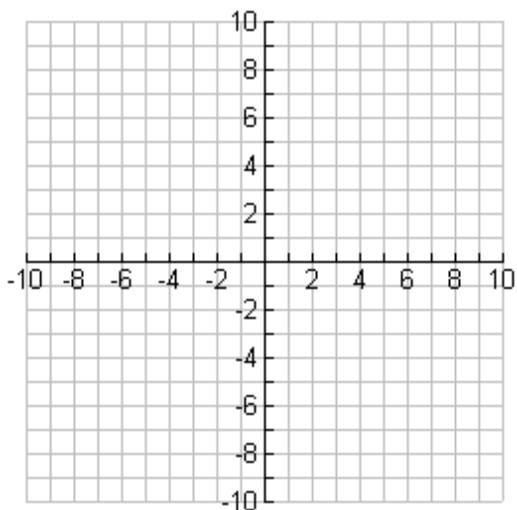
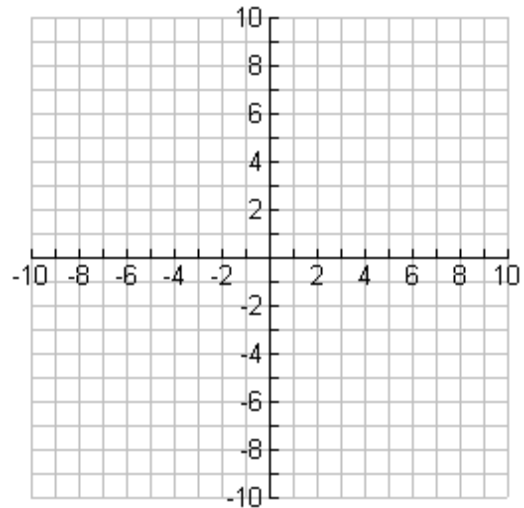
Date _____

Calculating Distance in the Complex Plane - Guided Lesson

1) Find the distance between $(3 + 1i)$ and $(6 + 5i)$ on the complex plane.



2) Calculate the distance between $(-2 - 2i)$ and $(-6 + 4i)$ on the complex plane.



3) What is the distance between $(-2 + 2i)$ and $(-6 + 5i)$ on the complex plane?

