

Name \_\_\_\_\_

Date \_\_\_\_\_

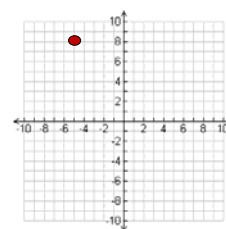
**Graphing Complex Numbers - Matching Worksheet**

Match the complex numbers to their graphs. Write the letter of the graph that matches the complex number.

\_\_\_\_\_ 1.

$6 + 9i$

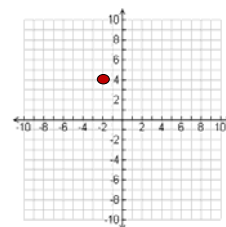
a.



\_\_\_\_\_ 2.

$3 + 7i$

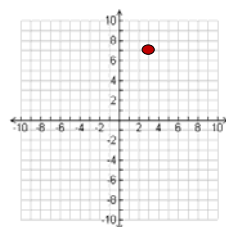
b.



\_\_\_\_\_ 3.

$-5 + 8i$

c.



\_\_\_\_\_ 4.

$-2 + 4i$

d.

