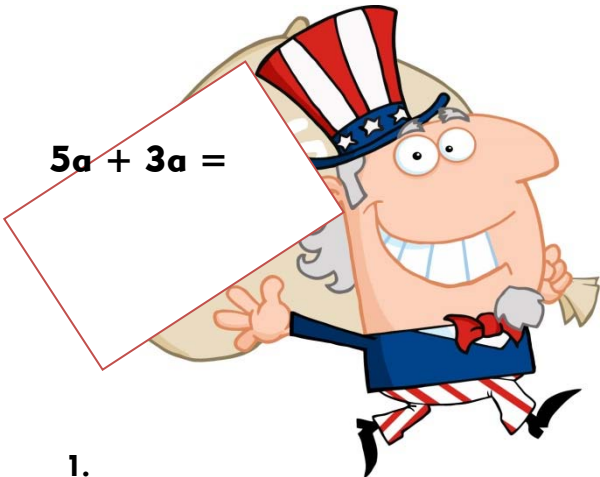


Name: \_\_\_\_\_

Date \_\_\_\_\_


## Presidents Day Adding & Subtracting Like Terms

Directions: Solve the adding and subtracting like terms problems.


$$5a + 3a =$$


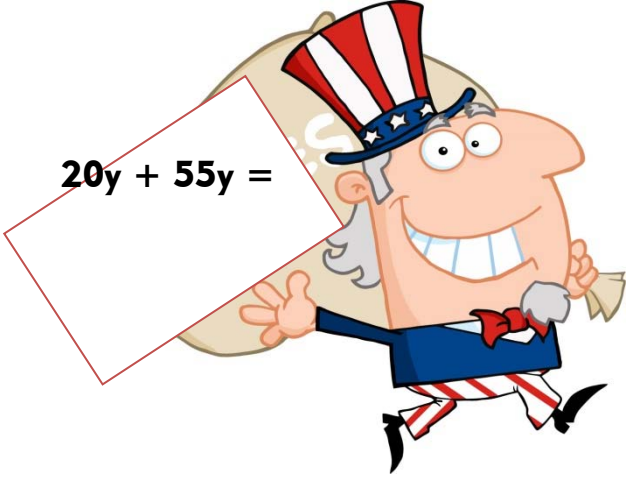
$$6t - 2t =$$


1.

$$11m + 7m =$$


$$M + 55M =$$


$$66d - 33d =$$


$$20y + 55y =$$




Name: \_\_\_\_\_

Date \_\_\_\_\_

## Presidents Day Adding & Subtracting Like Terms

### Answer Key

Directions: Solve the adding and subtracting like terms problems.

$$5a + 3a =$$

$$8a$$

1.

$$6t - 2t =$$

$$4t$$

$$11m + 7m =$$

$$18m$$

$$M + 55M$$

$$= 56M$$

$$66d - 33d =$$

$$33d$$

$$20y + 55y =$$

$$75y$$

