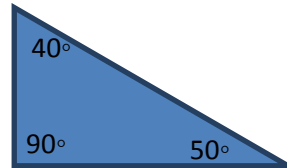


## Types of Triangles on Martin Luther King, Jr. Day

Directions: Mark the correct answer for the following types of triangles.

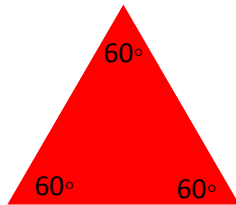


What type of triangle is this?



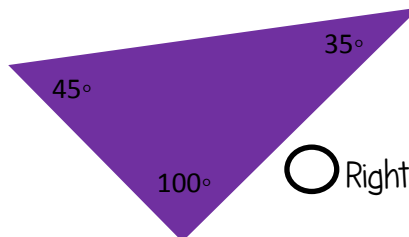
1.  Obtuse  Right  Acute

What type of triangle is this?



2.  Right  Obtuse  Acute

What type of triangle is this?

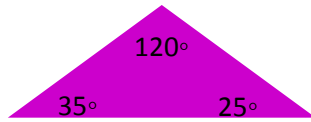


3.  Right  Obtuse  Acute

Name \_\_\_\_\_

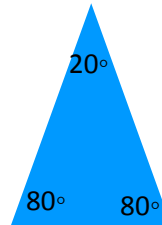
Date \_\_\_\_\_

What type of triangle is this?




4.  Obtuse     Acute     Right

What type of triangle is this?



5.  Right     Acute     Obtuse

What type of triangle is this?


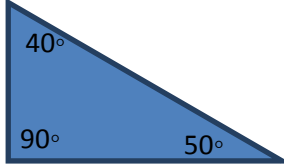


6.  Right     Obtuse     Acute

## Types of Triangles on Martin Luther King, Jr. Day


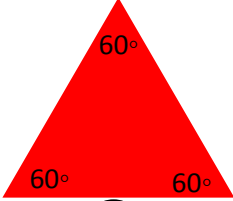
## Answer Key

Directions: Mark the correct answer for the following types of triangles.

1.  


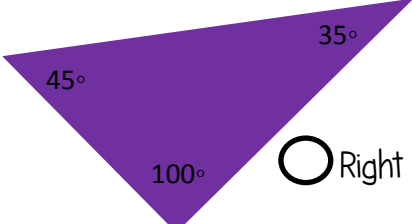
What type of triangle is this?

Obtuse  Right  Acute

2.  

What type of triangle is this?

Right  Obtuse  Acute

3.  

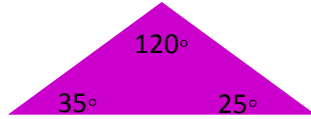
What type of triangle is this?

Right  Obtuse  Acute

Name \_\_\_\_\_

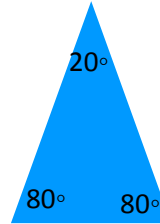
Date \_\_\_\_\_

What type of triangle is this?




4.  Obtuse     Acute     Right

What type of triangle is this?



5.  Right     Acute     Obtuse

What type of triangle is this?



6.  Right     Obtuse     Acute