

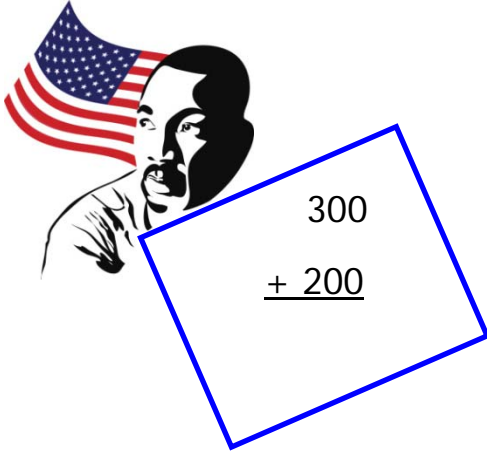
Name _____

Date _____

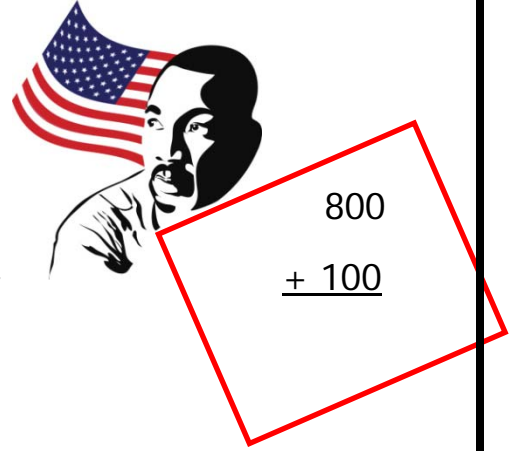
Martin Luther King Day Adding Multiples of 100

Directions: Solve for the following problems.


1.


$$\begin{array}{r} 300 \\ + 200 \\ \hline \end{array}$$

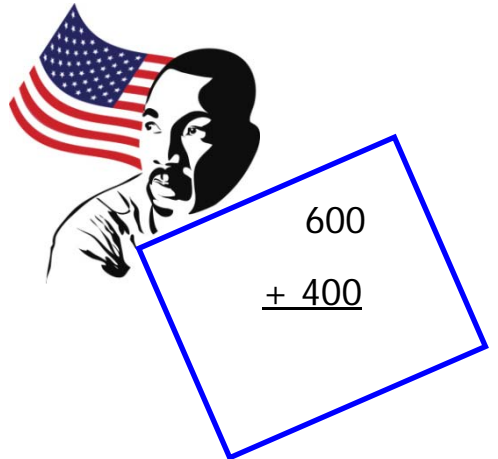
4.


$$\begin{array}{r} 800 \\ + 100 \\ \hline \end{array}$$

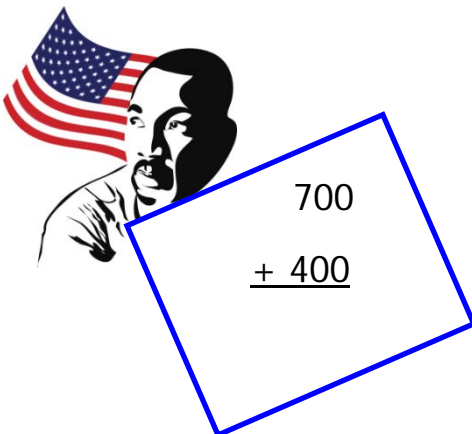
2.


$$\begin{array}{r} 400 \\ + 300 \\ \hline \end{array}$$


5.


$$\begin{array}{r} 600 \\ + 400 \\ \hline \end{array}$$

3.


$$\begin{array}{r} 700 \\ + 400 \\ \hline \end{array}$$

6.


$$\begin{array}{r} 900 \\ + 700 \\ \hline \end{array}$$

Name _____

Date _____

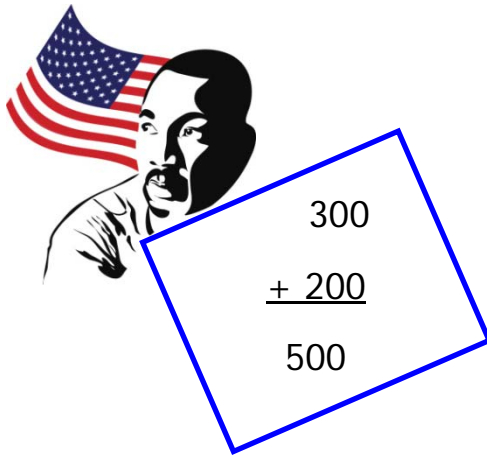
Martin Luther King Day

Adding Multiples of 100


Answer Key

Directions: Solve for the following problems.

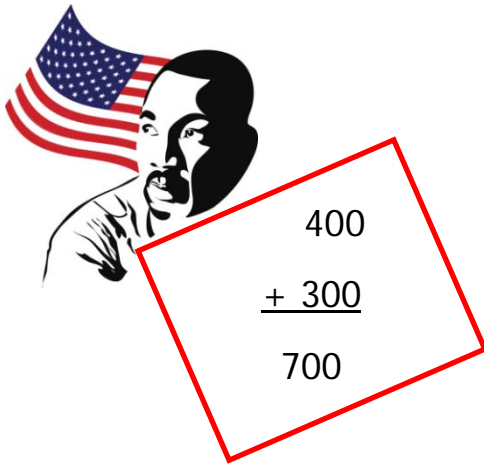
1.


$$\begin{array}{r} 300 \\ + 200 \\ \hline 500 \end{array}$$

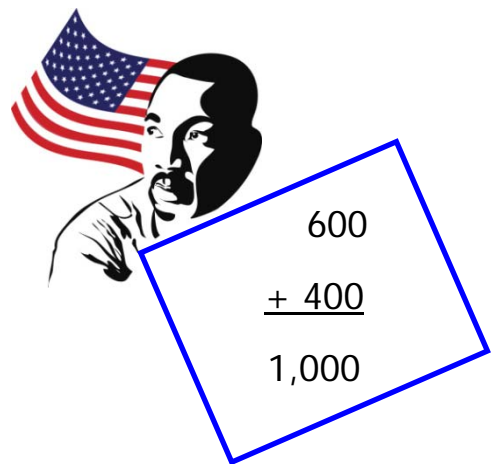
4.


$$\begin{array}{r} 800 \\ + 100 \\ \hline 900 \end{array}$$

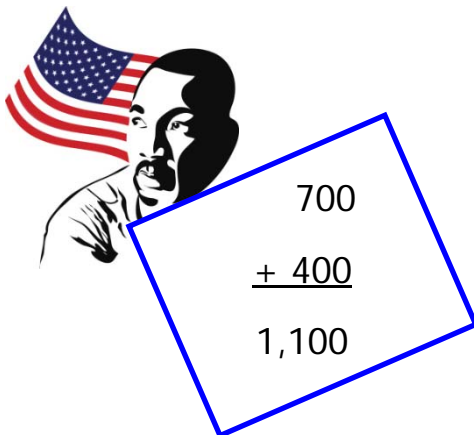
2.


$$\begin{array}{r} 400 \\ + 300 \\ \hline 700 \end{array}$$


5.


$$\begin{array}{r} 600 \\ + 400 \\ \hline 1,000 \end{array}$$

3.


$$\begin{array}{r} 700 \\ + 400 \\ \hline 1,100 \end{array}$$

6.


$$\begin{array}{r} 900 \\ + 700 \\ \hline 1,600 \end{array}$$