

Name _____

Date _____

Comparing Sides & Vertices on MLK Day


Directions: Compare the sides and vertices as instructed.



i have a dream!

1.


Which shape has more vertices?



i have a dream!

3.


Which shape has fewer vertices?



i have a dream!

2.

Which shape has more sides?



i have a dream!

4.

Which shape has fewer sides?



Name _____

Date _____

Comparing Sides & Vertices on MLK Day

Answer Key


Directions: Compare the sides and vertices as instructed.



i have a dream!

1.


Which shape has more vertices?



i have a dream!

3.


Which shape has fewer vertices?



i have a dream!

2.

Which shape has more sides?



i have a dream!

4.

Which shape has fewer sides?

