




Self Determination for Kwanzaa by Converting from Expanded Form


Name: _____ Date: _____

Directions: Write the following numbers in standard form.


1.  $30 + 9 = \underline{\hspace{2cm}}$


6.  $400 + 30 = \underline{\hspace{2cm}}$


2.  $300 + 40 + 8 = \underline{\hspace{2cm}}$


7.  $200 + 9 = \underline{\hspace{2cm}}$

3.  $60 + 4 = \underline{\hspace{2cm}}$

8.  $300 + 2 = \underline{\hspace{2cm}}$

4.  $700 + 50 + 3 = \underline{\hspace{2cm}}$

9.  $800 + 1 = \underline{\hspace{2cm}}$

5.  $90 + 1 = \underline{\hspace{2cm}}$

10.  $100 + 10 = \underline{\hspace{2cm}}$

Self Determination for Kwanzaa by Converting from Expanded Form

Answer Key

Directions: Write the following numbers in standard form.

1.  $30 + 9 = 39$

6.  $400 + 30 = 430$


2.  $300 + 40 + 8 = 348$

7.  $200 + 9 = 209$

3.  $60 + 4 = 64$

8.  $300 + 2 = 302$

4.  $700 + 50 + 3 = 753$

9.  $800 + 1 = 801$

5.  $90 + 1 = 91$

10.  $100 + 10 = 110$