

Name _____

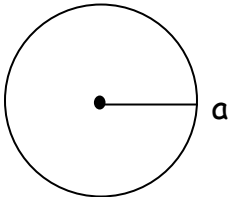
Date _____



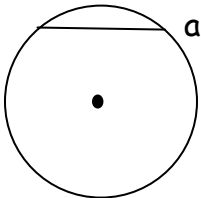
Father's Day Geometry



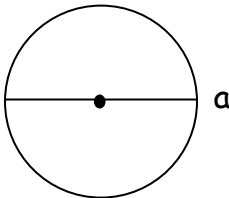
Cindy Lou is having trouble with her geometry homework. Look at each circle. Write center, radius, diameter, or chord to identify the parts of each circle.



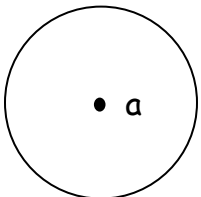
a=



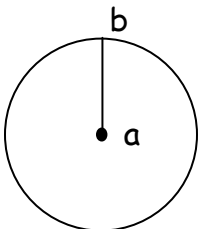
a=



a=

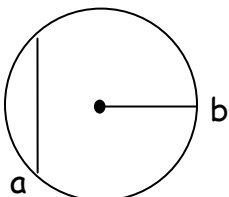


a=



a=

b=



a=

b=



Name _____

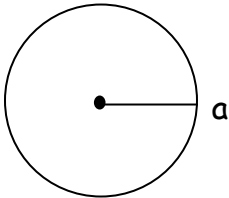
Date _____



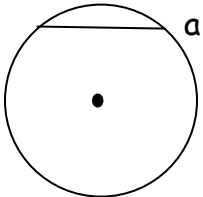
Father's Day Geometry



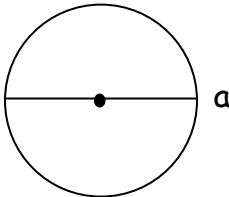
Cindy Lou is having trouble with her geometry homework. Look at each circle. Write center, radius, diameter, or chord to identify the parts of each circle.



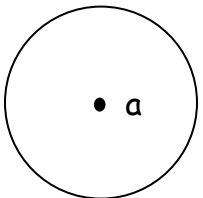
a= radius



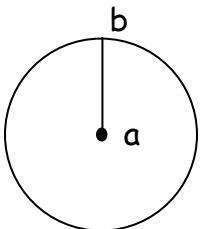
a= chord



a= diameter

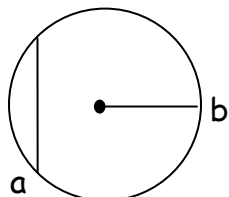


a= center



a= center

b= radius



a= chord

b= radius

