

Name _____

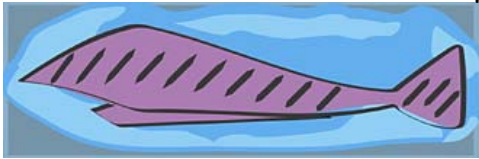
Date _____



Father's Day Gift

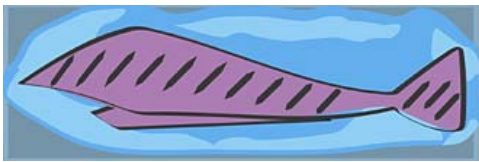


We got Dad the best gift ever, a brand new tie! Look at each box holding a tie. Partition the box into equal areas and then express each part as a unit fraction.



Partition this tie box into fourths.

What is the unit fraction of each part? _____




Partition this tie box into halves.

What is the unit fraction of each part? _____



Partition this tie box into sixths.

What is the unit fraction of each part? _____



Partition this tie box into thirds.

What is the unit fraction of each part? _____



Partition this tie box into tenths.

What is the unit fraction of each part? _____



Partition this tie box into fifths.

What is the unit fraction of each part? _____



Partition this tie box into eighths.

What is the unit fraction of each part? _____



Partition this tie box into twelfths.

What is the unit fraction of each part? _____



Name _____

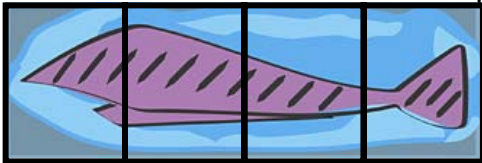
Date _____



Father's Day Gift

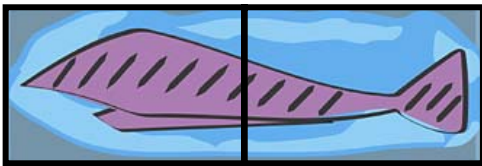


We got Dad the best gift ever, a brand new tie! Look at each box holding a tie. Partition the box into equal areas and then express each part as a unit fraction.



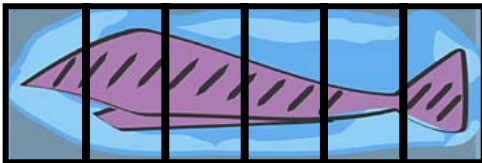
Partition this tie box into fourths.

What is the unit fraction of each part? $\frac{1}{4}$



Partition this tie box into halves.

What is the unit fraction of each part? $\frac{1}{2}$



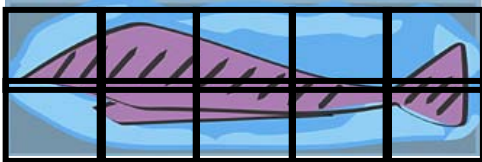
Partition this tie box into sixths.

What is the unit fraction of each part? $\frac{1}{6}$



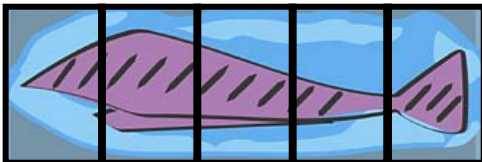
Partition this tie box into thirds.

What is the unit fraction of each part? $\frac{1}{3}$



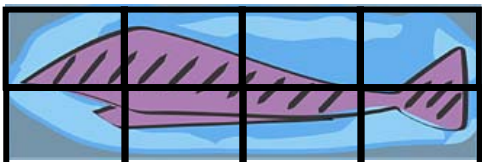
Partition this tie box into tenths.

What is the unit fraction of each part? $\frac{1}{10}$



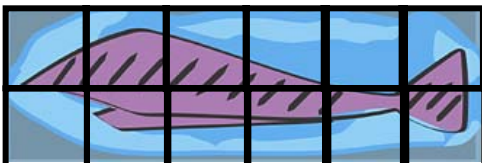
Partition this tie box into fifths.

What is the unit fraction of each part? $\frac{1}{5}$



Partition this tie box into eighths.

What is the unit fraction of each part? $\frac{1}{8}$



Partition this tie box into twelfths.

What is the unit fraction of each part? $\frac{1}{12}$

