


Name: _____

Date _____

Topic : Transformation - Identify Line Reflection - Worksheet 1

Are the images reflections of each other?

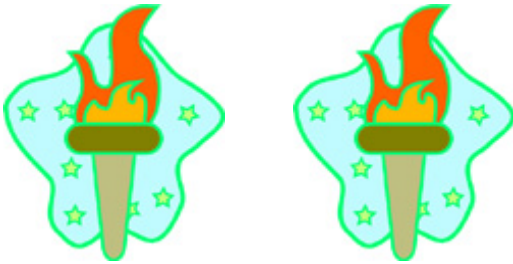
1.



2.



3.



4.



5.



6.



7.



8.



9.



10.



Name: _____

Date _____

Topic : Transformation - Identify Line Reflection - Worksheet 2

Are the images reflections of each other?

1.



2.



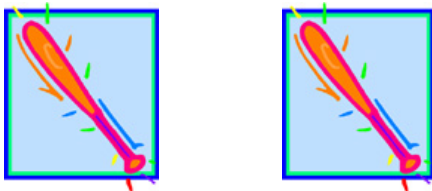
3.



4.




5.



6.



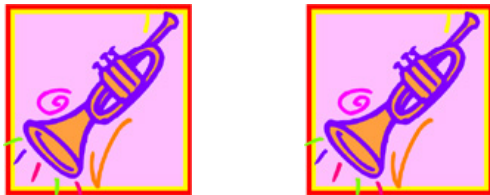
7.




8.



9.



10.



Name: _____

Date _____

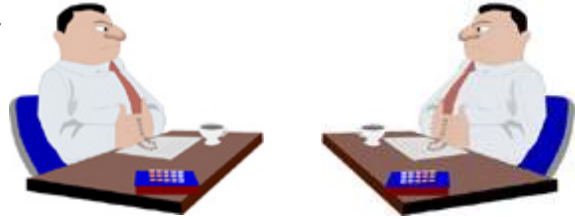
Topic : Transformation - Identify Line Reflection - Worksheet 3

Are the images reflections of each other?

1.



2.



3.



4.



5.




6.




7.




8.



9.



10.

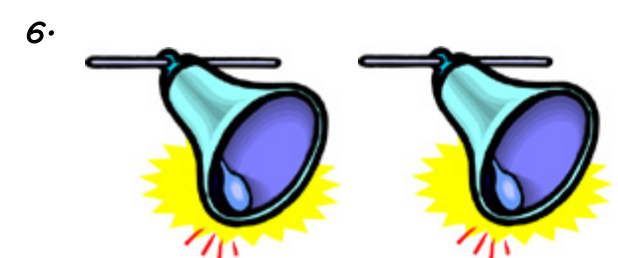
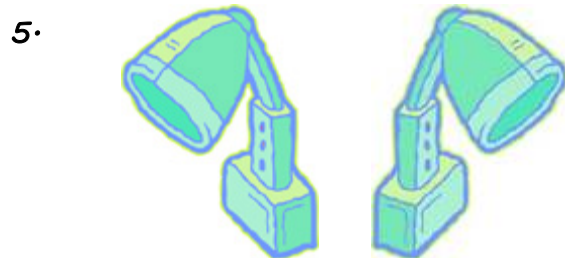
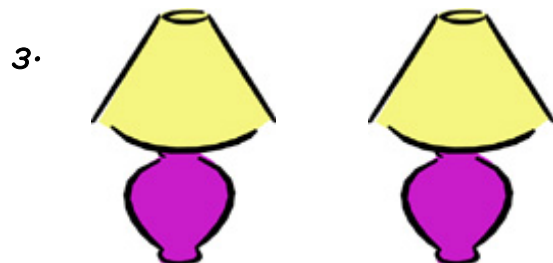



Name: _____

Date _____

Topic : Transformation - Identify Line Reflection - Worksheet 4

Are the images reflections of each other?



Name: _____

Date _____

Topic : Transformation - Identify Line Reflection - Worksheet 5

Are the images reflections of each other?

