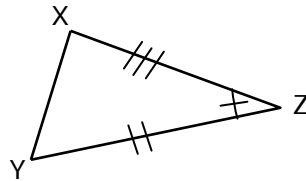
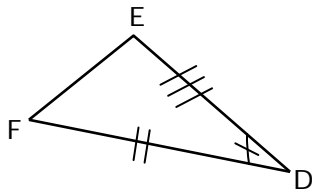


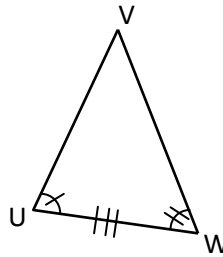
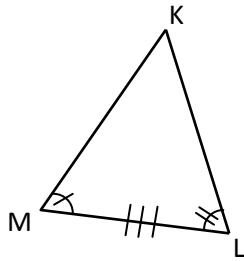
Proving Triangle Congruence - Guided Lesson

For each set below, determine if the triangles are congruent. State the proof that needs to be used (ASA, SAS, or SSS).

1)



2)



3)

