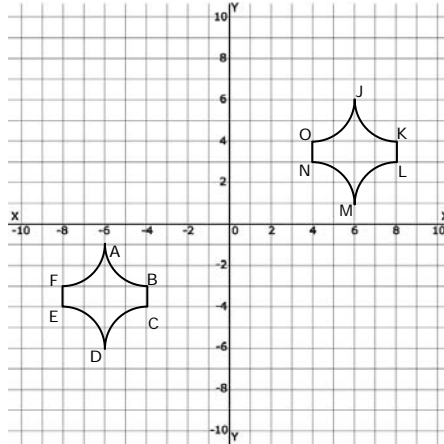


Rigid Motions and Congruent Triangles - Matching Worksheet

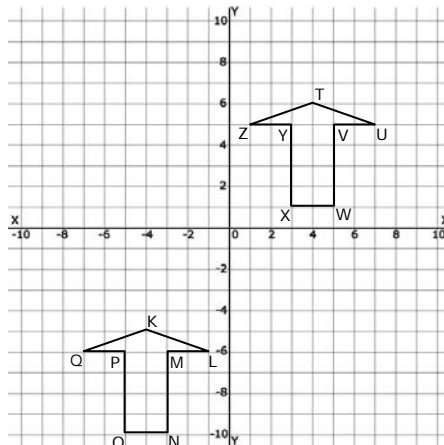
Write the letter of the answer that matches the problem.

1. You can map JKLMNO to ABCDEF by the Translation. Find the coordinate notation.



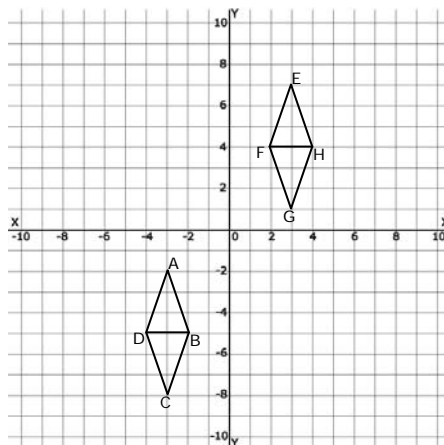
a. $T(0, 9)$

2. You can map KLMNOPQ to TUVWXYZ by the Translation. Find the coordinate notation.



b. $T(12, 7)$

3. You can map ABCD to EFGH by a reflection followed by a translation. Provide the coordinate notation for each.



c. $T(8, 11)$

