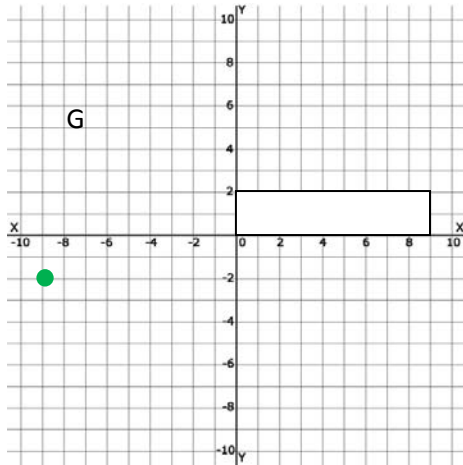


Drawing Transformed Figures Problems - Matching Worksheet

Write the letter of the answer that matches the problem.

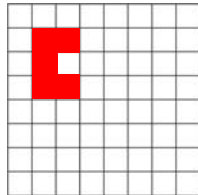
1. What are the coordinates of G (-9, -2) after a rotation 180° counterclockwise around the origin?

a. (6, -4)




2. Look at this Shape

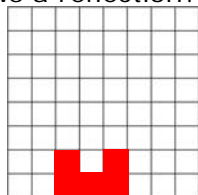
b. (9, 2)



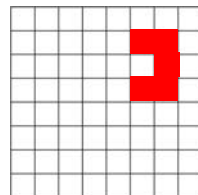
Which image shows a reflection?



A



B



C

3. What are the coordinates of Y (4, 6) after a rotation 90° clockwise around the origin?

c. C

