

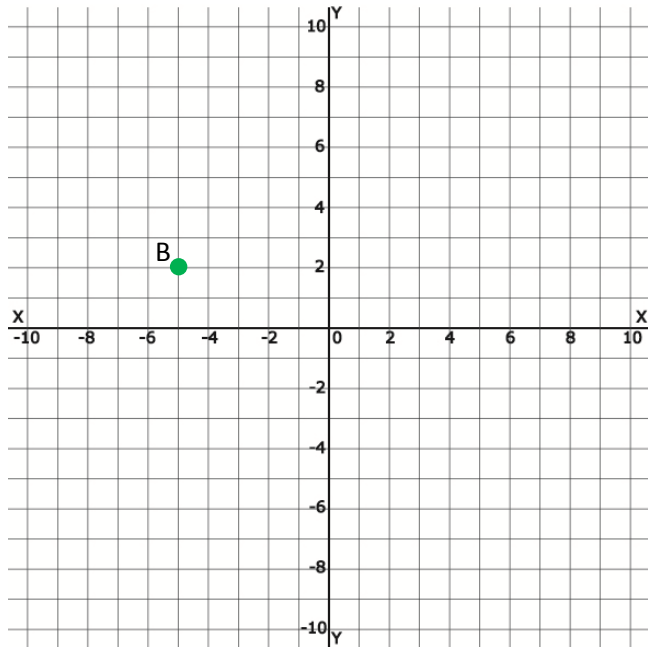
Name _____

Date _____

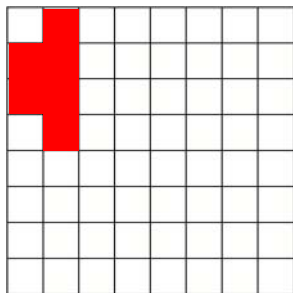
Drawing Transformed Figures Problems - Guided Lesson

Complete the following problems:

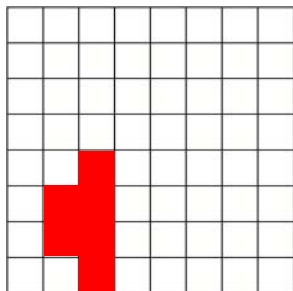
1) Graph the image of B (-5, 2) after a rotation 180° counterclockwise around the origin.



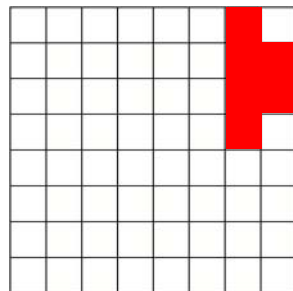
2) Look at this shape on the coordinate graph:



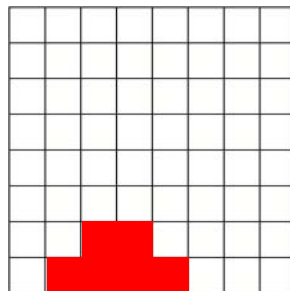
Which Image shows a reflection of this shape?



A



B



C



Name _____

Date _____

3) Graph the image of EFGH after the following glide reflection:

Translation $(x, y) \rightarrow (x+2, y)$

Reflection across the x-axis

