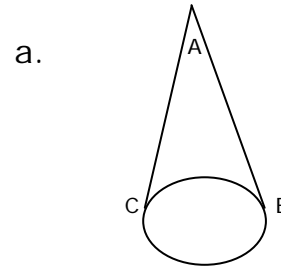
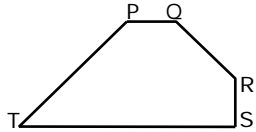


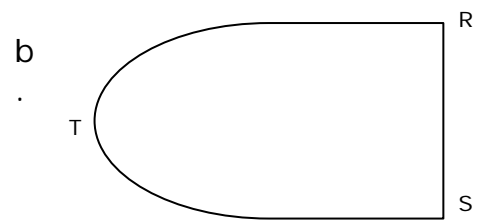
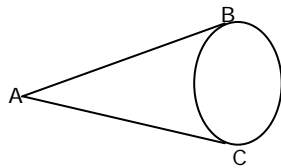
**Rotations, Reflections, and Translations of Geometric Shapes-  
Matching Worksheet**

Write the letter of the answer that matches the problem.

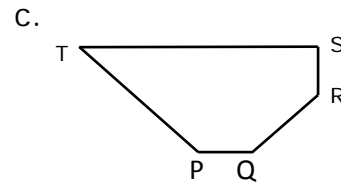
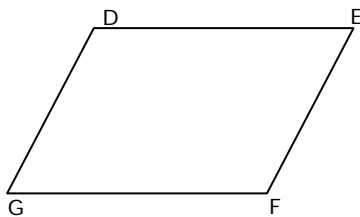
\_\_\_\_\_ 1. Find diagram which shows figure PQRST reflected down?



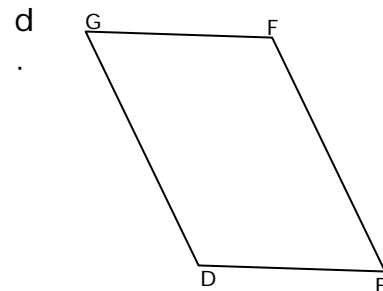
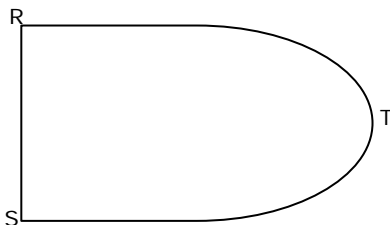
\_\_\_\_\_ 2. Find diagram which shows figure ABC reflected up?



\_\_\_\_\_ 3. Find diagram which shows figure DEFG reflected down?



\_\_\_\_\_ 4. Find diagram which shows figure RST reflected right?



\_\_\_\_\_ 5. Find diagram which shows figure PQR reflected up?

