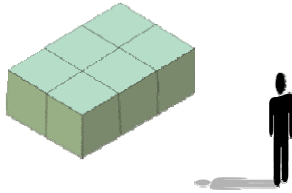


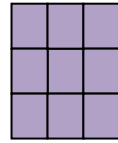
Cross-sections of Three-Dimensional Objects - Matching Worksheet

Write the letter of the answer that matches the problem.


1. Looking at this object from the right, what will you see?



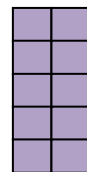
a.



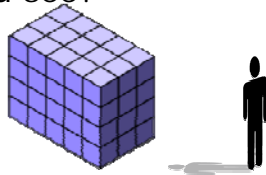
2. Looking at this object from the left, what will you see?



b.



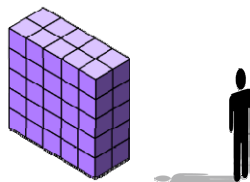
3. Looking at this object from the right, what will you see?




c.



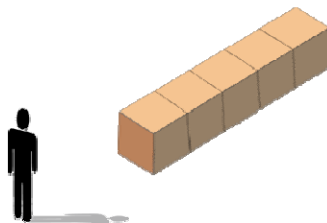
4. Looking at this object from the right, what will you see?



d.



5. Looking at this object from the left, what will you see?



e.

