

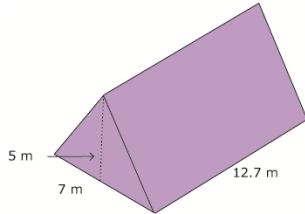
Name _____

Date _____

Volume of Cylinders and Pyramids- Matching Worksheet

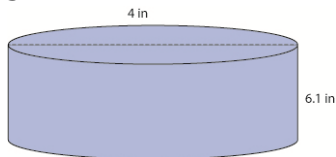
Write the letter of the answer that matches the problem.

1. What is the volume?



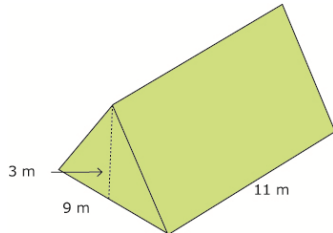
a. 57.41 yd^3

2. What is the volume of this cylinder? Use $\pi \approx 3.14$.



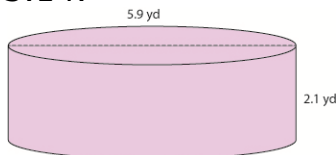
b. 222.25 m^3

3. What is the volume?



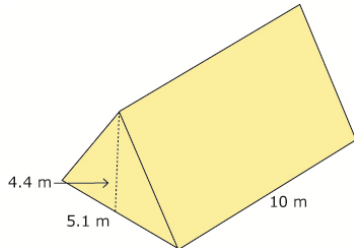
c. 112.2 m^3

4. What is the volume of this cylinder? Use $\pi \approx 3.14$.



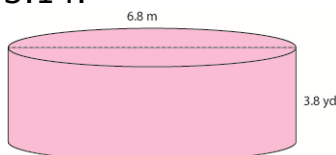
d. 138 yd^3

5. What is the volume?



e. 76.65 in^3

6. What is the volume of this cylinder? Use $\pi \approx 3.14$.



f. 148.5 m^3

