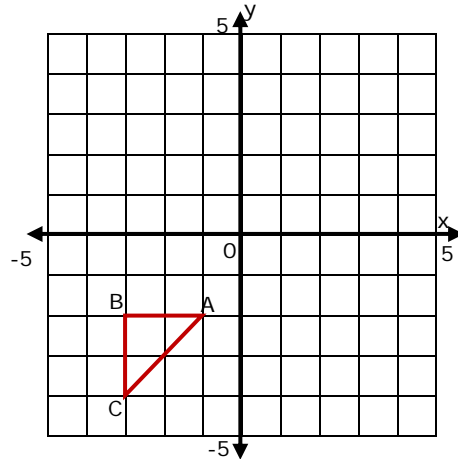
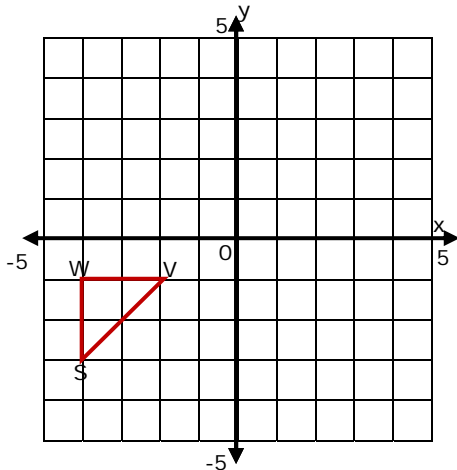


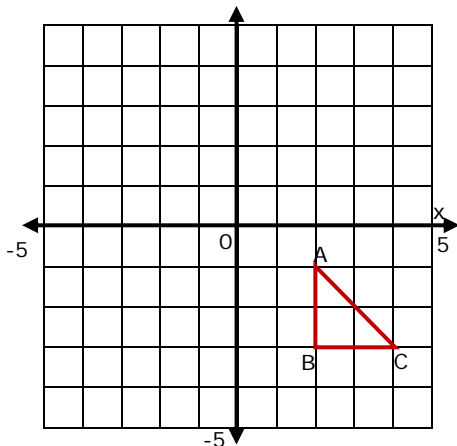
Graphing Complex Transformations - Matching Worksheet

Write the letter of the answer that matches the problem.

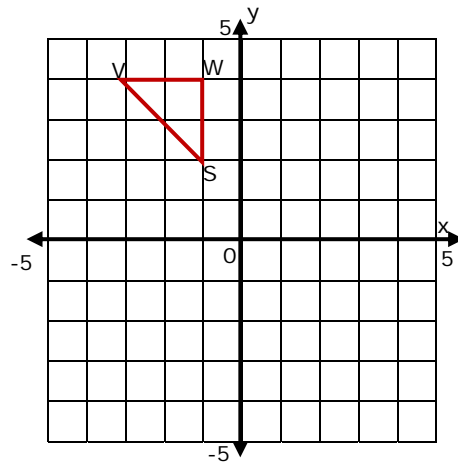
a.



1. Graph the image of SWV after the following transformations:
 Translation $(x, y) \rightarrow (x-1, y-1)$
 Rotation 270° counterclockwise around the origin.



b.



2. Graph the image of KLM after the following transformations:
 Translation $(x, y) \rightarrow (x-1, y-1)$
 Rotation 270° counterclockwise around the origin.

