








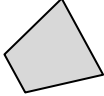


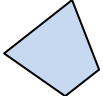

Name: \_\_\_\_\_







Date \_\_\_\_\_







Topic : Transformations - Working with Translations - Worksheet 1







Which of following figures is a translation of the shape in the first column?

1.  A.  B.  C.  D.  E. 



2.  A.  B.  C.  D.  E. 



3.  A.  B.  C.  D.  E. 



4.  A.  B.  C.  D.  E. 



5.  A.  B.  C.  D.  E. 



Describe the change in orientation of the object, from A to B, as horizontal or vertical.

6. A.  B. 

7. A.  B. 

8. A.  B. 

9. A.  B. 

10. A.  B. 















Name: \_\_\_\_\_







Date \_\_\_\_\_




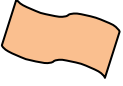


Topic : Transformations - Working with Translations - Worksheet 2







Which of following figures is a translation of the shape in the first column?

1.  A.  B.  C.  D.  E. 



2.  A.  B.  C.  D.  E. 



3.  A.  B.  C.  D.  E. 



4.  A.  B.  C.  D.  E. 



5.  A.  B.  C.  D.  E. 



Describe the change in orientation of the object, from A to B, as horizontal or vertical.

6. A.  B. 

7. A.  B. 

8. A.  B. 

9. A.  B. 

10. A.  B. 


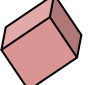













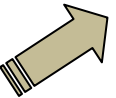
















Name: \_\_\_\_\_




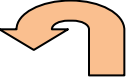


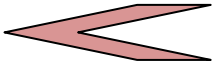
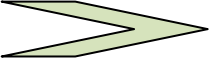


Date \_\_\_\_\_

Topic : Transformations - Working with Translations - Worksheet 3

Which of following figures is a translation of the shape in the first column?

1.		A.		B.		C.		D.		E.	
2.		A.		B.		C.		D.		E.	
3.		A.		B.		C.		D.		E.	
4.		A.		B.		C.		D.		E.	
5.		A.		B.		C.		D.		E.	

Describe the change in orientation of the object, from A to B, as horizontal or vertical.

6.	A.		B.	
7.	A.		B.	
8.	A.		B.	
9.	A.		B.	
10.	A.		B.	


















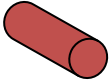








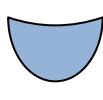





Name: \_\_\_\_\_







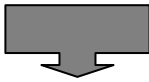
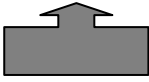


Date \_\_\_\_\_

Topic : Transformations - Working with Translations - Worksheet 4

Which of following figures is a translation of the shape in the first column?

1.		A.		B.		C.		D.		E.	
2.		A.		B.		C.		D.		E.	
3.		A.		B.		C.		D.		E.	
4.		A.		B.		C.		D.		E.	
5.		A.		B.		C.		D.		E.	

Describe the change in orientation of the object, from A to B, as horizontal or vertical.

6.	A.		B.	
7.	A.		B.	
8.	A.		B.	
9.	A.		B.	
10.	A.		B.	

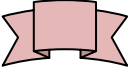
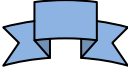
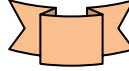

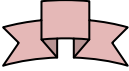
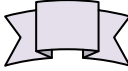








Name: \_\_\_\_\_







Date \_\_\_\_\_







Topic : Transformations - Working with Translations - Worksheet 5


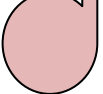




Which of following figures is a translation of the shape in the first column?

1.  A.  B.  C.  D.  E. 



2.  A.  B.  C.  D.  E. 



3.  A.  B.  C.  D.  E. 



4.  A.  B.  C.  D.  E. 



5.  A.  B.  C.  D.  E. 


Describe the change in orientation of the object, from A to B, as horizontal or vertical.

6. A.  B. 

7. A.  B. 

8. A.  B. 

9. A.  B. 

10. A.  B. 