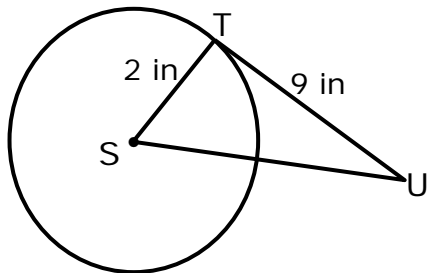


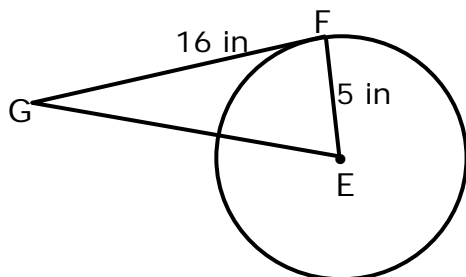
Tangent Lines - Independent Practice Worksheet

Complete all the problems.

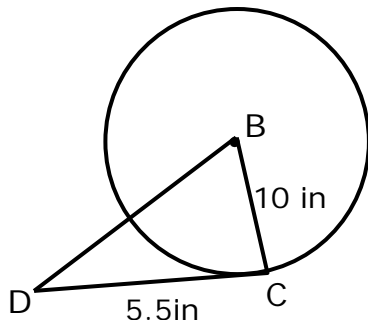
1. \overleftrightarrow{TU} is tangent to $\odot S$ with center S. What is SU?



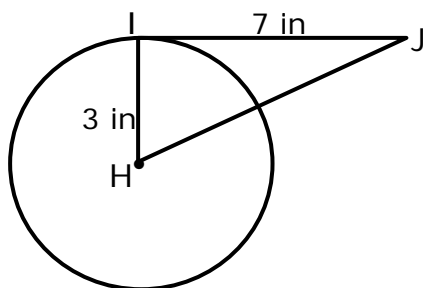
2. \overleftrightarrow{FG} is tangent to $\odot E$ with center E. What is EG?



3. \overleftrightarrow{CD} is tangent to $\odot B$ with center B. What is BD?



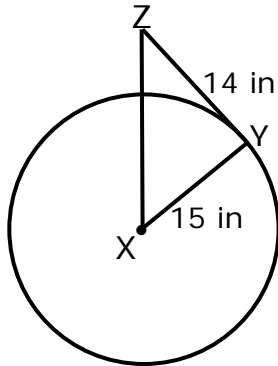
4. \overleftrightarrow{IJ} is tangent to $\odot H$ with center H. What is HJ?



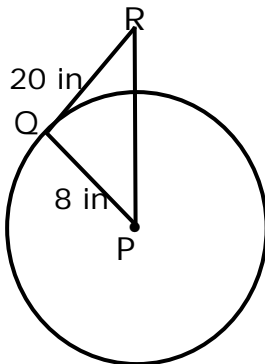
Name _____

Date _____

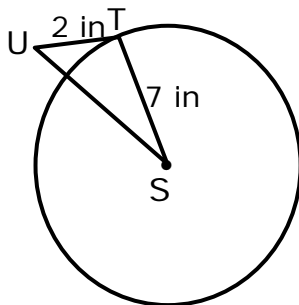
5. \overleftrightarrow{YZ} is tangent to \odot with center X. What is XZ?



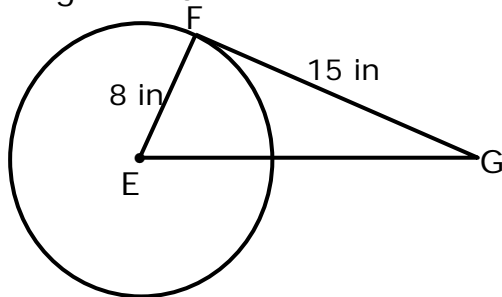
6. \overleftrightarrow{QR} is tangent to \odot with center P. What is PR?



7. \overleftrightarrow{TU} is tangent to \odot with center S. What is SU?



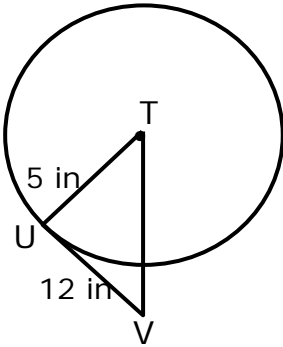
8. \overleftrightarrow{FG} is tangent to \odot with center E. What is EG?



Name _____

Date _____

9. \overleftrightarrow{UV} is tangent to \odot with center T. What is TV?



10. \overleftrightarrow{KL} is tangent to \odot with center J. What is JL?

