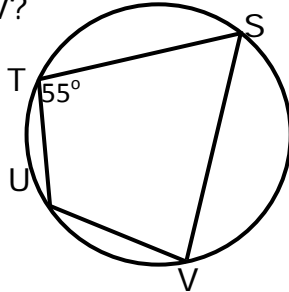


## Angles in Inscribed Right Triangles and Quadrilaterals - Matching Worksheet

Write the letter of the answer that matches the problem.

1. What is  $m\angle V$ ?

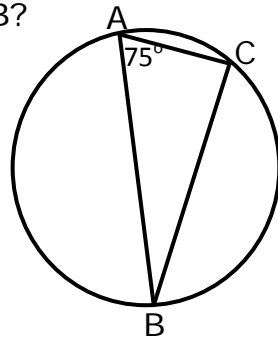
\_\_\_\_\_



a.  $15^\circ$

2. What is  $m\angle B$ ?

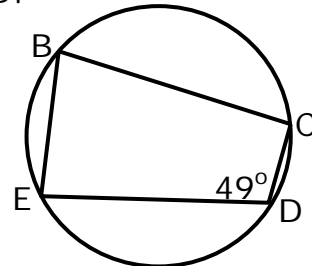
\_\_\_\_\_



b.  $57^\circ$

3. What is  $m\angle B$ ?

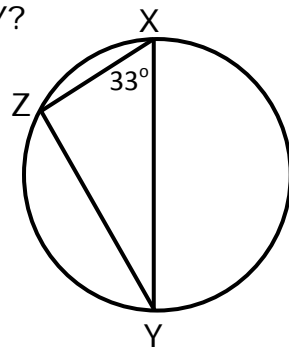
\_\_\_\_\_



c.  $125^\circ$

4. What is  $m\angle Y$ ?

\_\_\_\_\_



d.  $131^\circ$

