

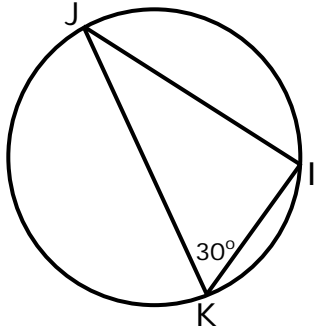
Name _____

Date _____

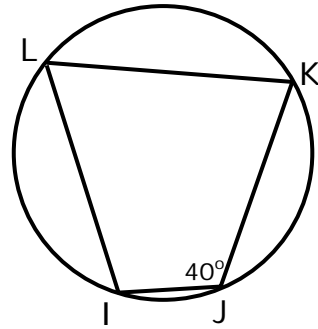
Angles in Inscribed Right Triangles and Quadrilaterals- Independent Practice Worksheet

Complete all the problems.

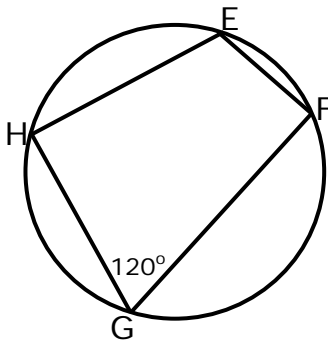
1. What is $m\angle J$?



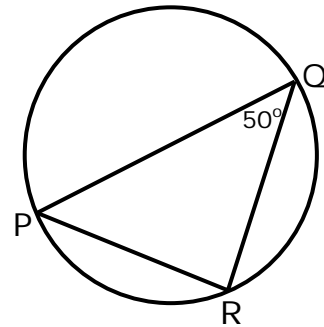
4. What is $m\angle L$?



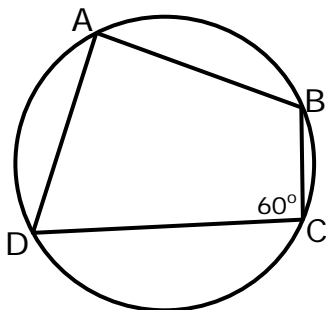
2. What is $m\angle E$?



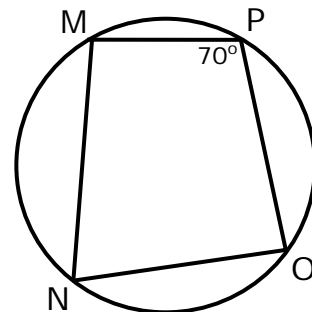
5. What is $m\angle P$?



3. What is $m\angle A$?



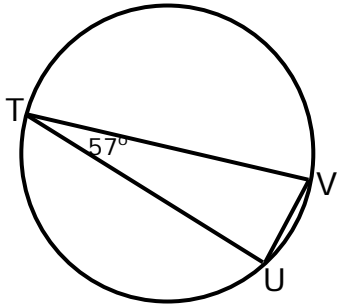
6. What is $m\angle N$?



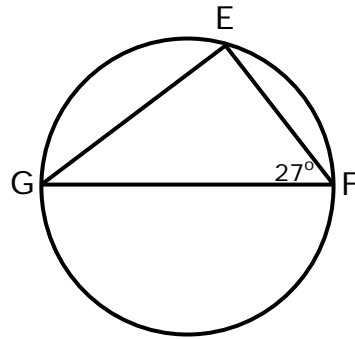
Name _____

Date _____

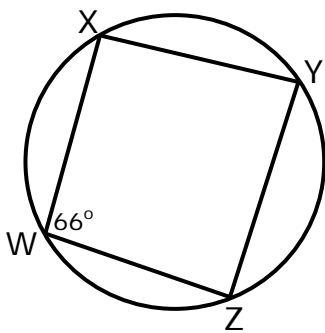
7. What is $m\angle V$?



10. What is $m\angle G$?



8. What is $m\angle Y$?



9. What is $m\angle D$?

