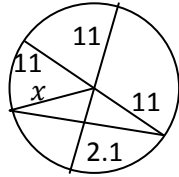


Circles: Inscribed Angles, Arcs and Chords - Matching Worksheet

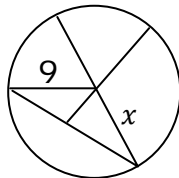
Write the letter of the answer that matches the problem.

1. Find the value of x.



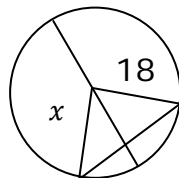
a. 18

2.



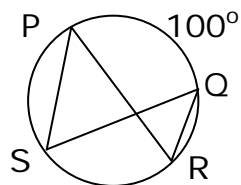
b. 50°

3.



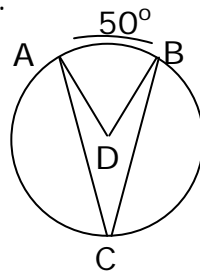
c. 25°

4. Find m ∠S and m ∠R.



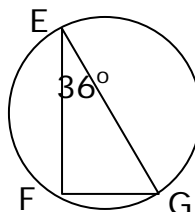
d. 11

5. Find m ∠C.



e. 54°

6. Find m ∠G.



f. 9

