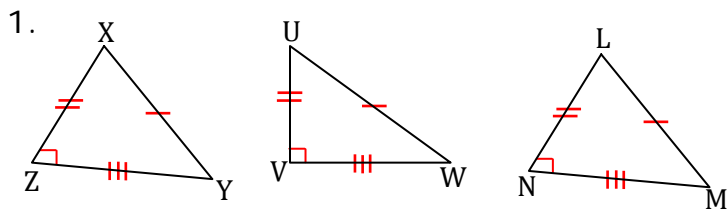
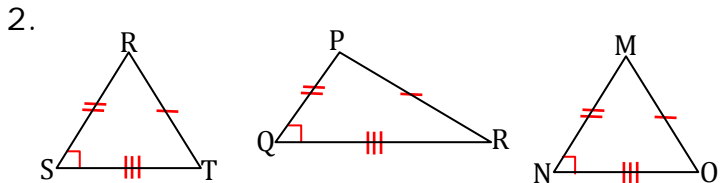


Congruent Triangles: SSS and SAS Theorems - Matching Worksheet

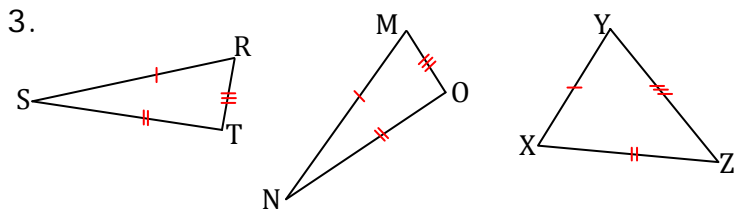
Write the letter of the two congruent triangles (use SSS or SAS only).



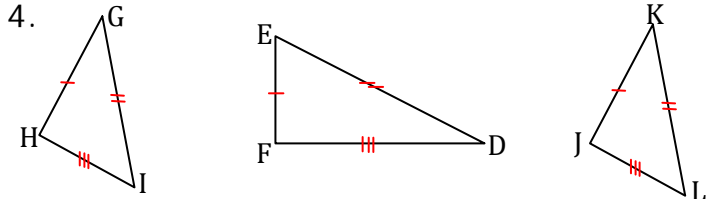
a. $\triangle abc \cong \triangle stu$



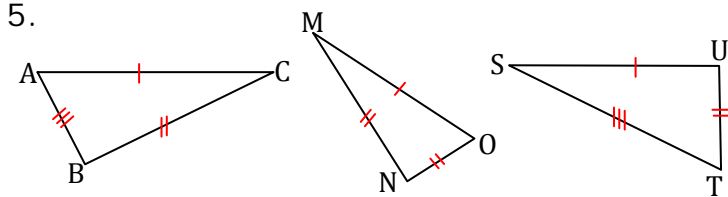
b. $\triangle hgi \cong \triangle jkl$



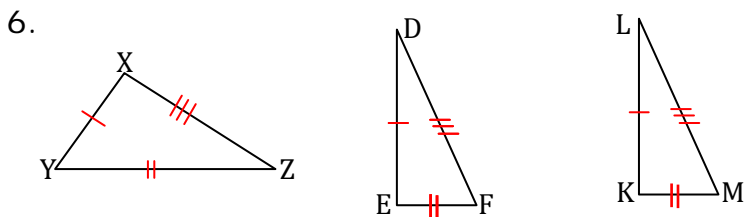
c. $\triangle def \cong \triangle lkm$



d. $\triangle rst \cong \triangle mno$



e. $\triangle srt \cong \triangle mno$



f. $\triangle xzy \cong \triangle lmn$

