

Name: \_\_\_\_\_

Score: \_\_\_\_\_

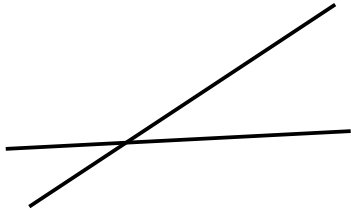
Teacher: \_\_\_\_\_

Date: \_\_\_\_\_

## Identifying Perpendicular Lines Worksheet 1


State whether the given pair of lines are perpendicular.

1)



Answer: \_\_\_\_\_

4)



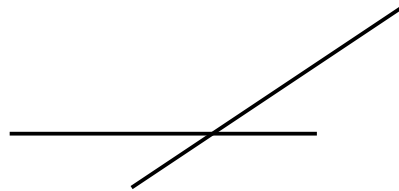
Answer: \_\_\_\_\_

2)




Answer: \_\_\_\_\_

5)



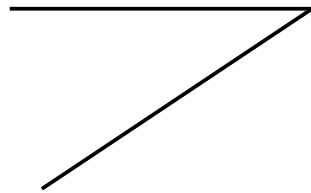
Answer: \_\_\_\_\_

3)



Answer: \_\_\_\_\_

6)



Answer: \_\_\_\_\_