

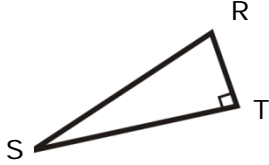
Name: _____

Date _____

Topic: Find the tangent of one point- Worksheet 1

Do the following:

1

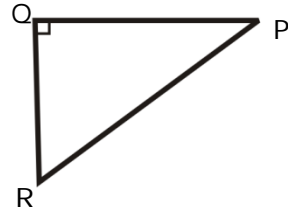


Find tan S.

$$RT=2.4$$

$$ST=3.2$$

2

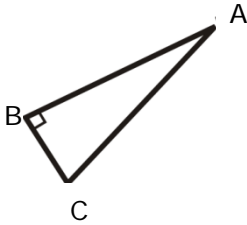


Find tan P.

$$RQ=1.6$$

$$QP=1.2$$

3

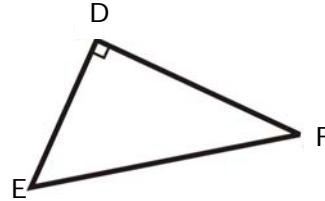


Find tan A.

$$CB=6$$

$$BA=3.4$$

4

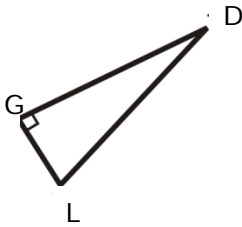


Find tan E.

$$DE=6$$

$$FD= 2.2$$

5

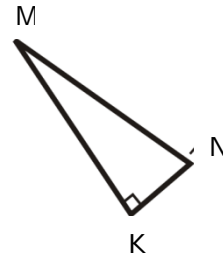


Find tan D.

$$DG=3.8$$

$$GL=7.2$$

6

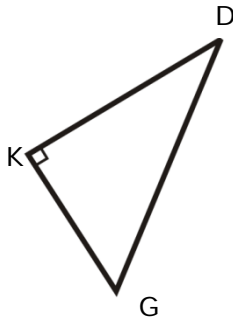


Find tan M.

$$NK=4.6$$

$$KM=3.6$$

7

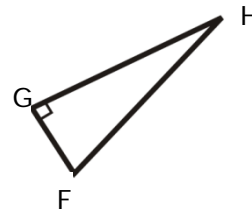


Find tan D.

$$GK=3.8$$

$$KD=5.2$$

8

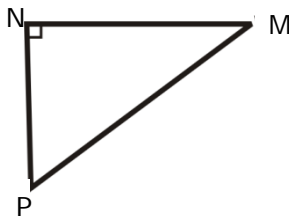


Find tan H.

$$FG=4.9$$

$$GH=3.6$$

9

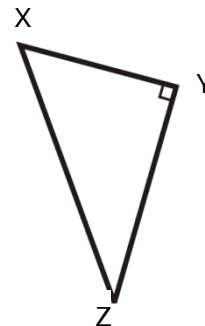


Find tan P.

$$MN=4.5$$

$$NP=4.7$$

10



Find tan X.

$$XY=1.2$$

$$YZ=2.7$$



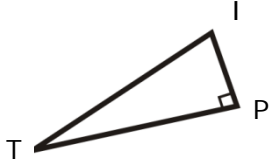
Name: _____

Date _____

Topic: Find the tangent of one point- Worksheet 2

Do the following:

1

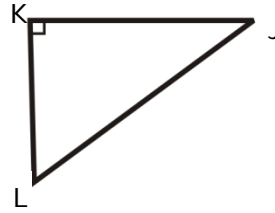


Find $\tan T$.

$$IP=2.7$$

$$TP=3.8$$

2

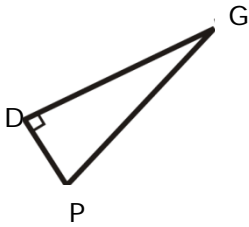


Find $\tan J$.

$$LK=1.8$$

$$KJ=1.1$$

3

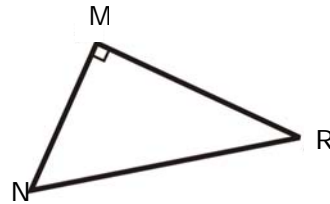


Find $\tan G$.

$$PD=4.4$$

$$DG=2.5$$

4

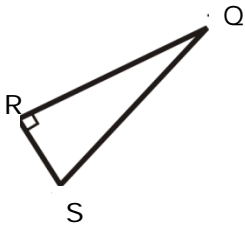


Find $\tan N$.

$$MN=4$$

$$MR=2.8$$

5

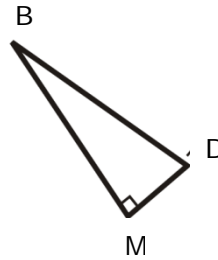


Find $\tan Q$.

$$QR=3.6$$

$$RS=6.8$$

6

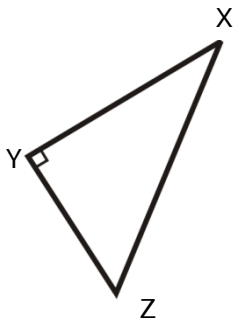


Find $\tan B$.

$$DM=5$$

$$MB=2.8$$

7

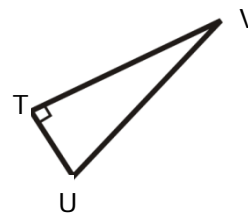


Find $\tan X$.

$$ZY=4.3$$

$$YX=5.8$$

8

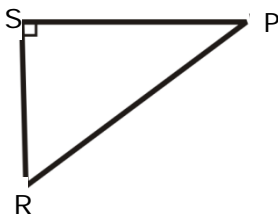


Find $\tan V$.

$$TU=5.2$$

$$TV=2.6$$

9

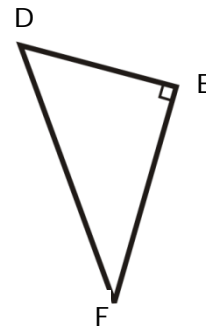


Find $\tan R$.

$$PS=4.8$$

$$SR=5.3$$

10



Find $\tan D$.

$$DE=1.8$$

$$EF=2.4$$



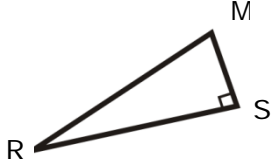
Name: _____

Date _____

Topic: Find the tangent of one point- Worksheet 3

Do the following:

1

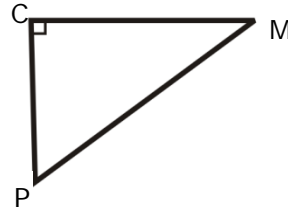


Find $\tan R$.

$$MS=3.2$$

$$RS=4.4$$

2

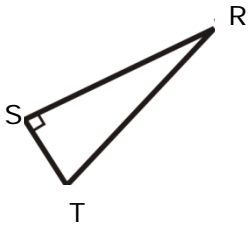


Find $\tan M$.

$$PC=2.2$$

$$CM=1.8$$

3

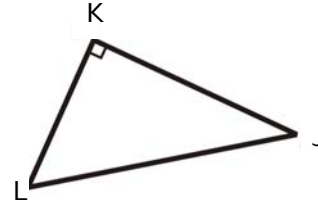


Find $\tan R$.

$$ST=5$$

$$RS=3.1$$

4

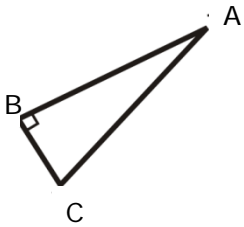


Find $\tan L$.

$$KL=6$$

$$KJ=1.2$$

5

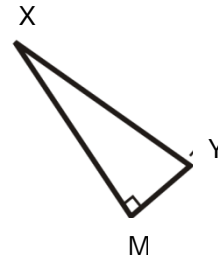


Find $\tan A$.

$$BA=2.6$$

$$CB=5.2$$

6

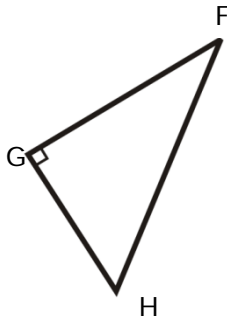


Find $\tan X$.

$$YM=4$$

$$MX=3.2$$

7

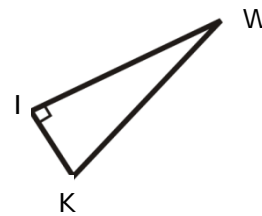


Find $\tan F$.

$$HG=4.2$$

$$GF=4.5$$

8

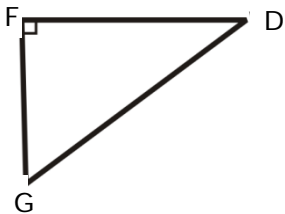


Find $\tan W$.

$$IK=4.8$$

$$WI=1.8$$

9

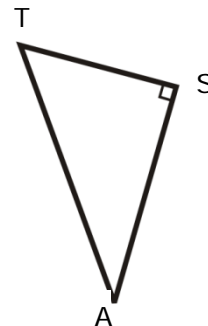


Find $\tan G$.

$$DF=3.8$$

$$FG=5.6$$

10



Find $\tan T$.

$$TS=1.2$$

$$SA=3.2$$



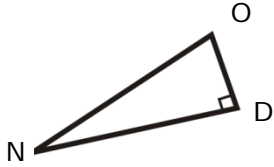
Name: _____

Date _____

Topic: Find the tangent of one point- Worksheet 4

Do the following:

1

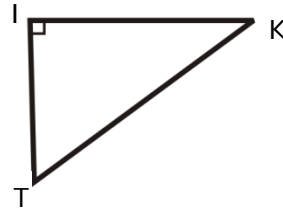


Find $\tan N$.

$$OD=2.2$$

$$DN=3.6$$

2

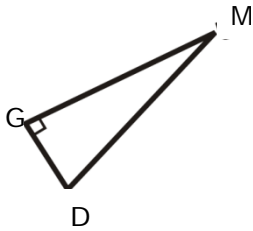


Find $\tan K$.

$$TI=1.8$$

$$IK=1.4$$

3

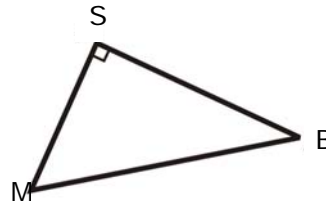


Find $\tan M$.

$$GD=5$$

$$GM=2.9$$

4

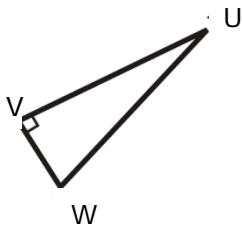


Find $\tan M$.

$$SM=7$$

$$SB=2.8$$

5

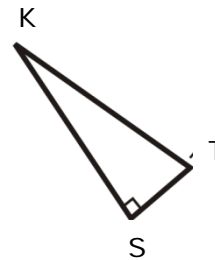


Find $\tan U$.

$$VU=1.8$$

$$WV=4.7$$

6

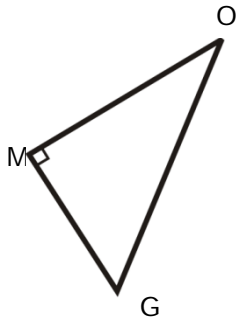


Find $\tan K$.

$$TS=3$$

$$SK=2.8$$

7

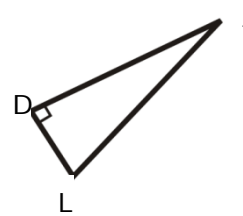


Find $\tan O$.

$$GM=3.5$$

$$MO=4.9$$

8

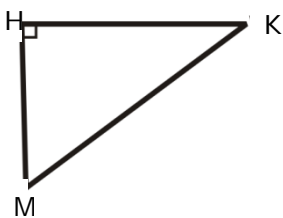


Find $\tan J$.

$$DL=5.2$$

$$JD=1.6$$

9

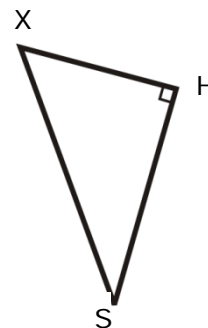


Find $\tan M$.

$$KH=3.6$$

$$HM=4.2$$

10



Find $\tan X$.

$$XH=1.4$$

$$HS=4.2$$



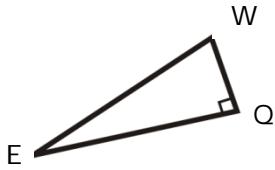
Name: _____

Date _____

Topic: Find the tangent of one point- Worksheet 5

Do the following:

1

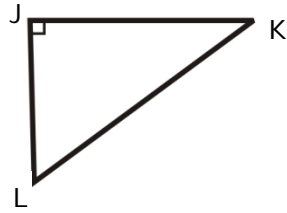


Find $\tan E$.

$$WQ=3.4$$

$$QE=1.7$$

2

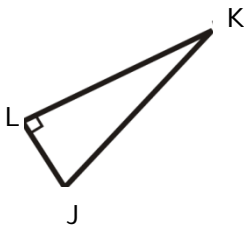


Find $\tan K$.

$$LJ=2.5$$

$$JK=2.2$$

3

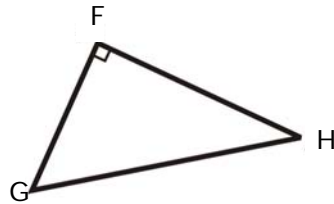


Find $\tan K$.

$$LJ=4.6$$

$$KL=1.6$$

4

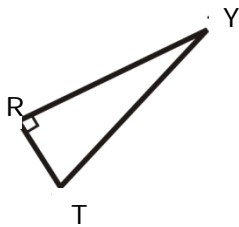


Find $\tan G$.

$$FG=5$$

$$FH= 1.6$$

5

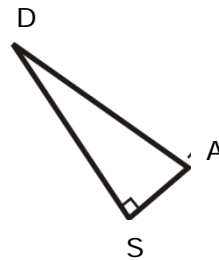


Find $\tan Y$.

$$RY=2.2$$

$$TR=4.4$$

6

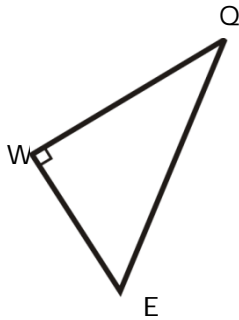


Find $\tan D$.

$$AS=2.4$$

$$SD=1.8$$

7

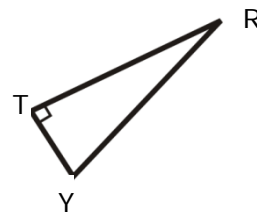


Find $\tan Q$.

$$WE=4.2$$

$$WQ=5.6$$

8

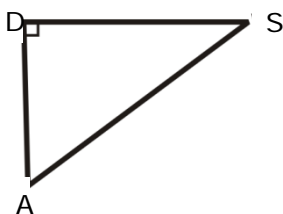


Find $\tan R$.

$$YT=4.8$$

$$TR=1.8$$

9

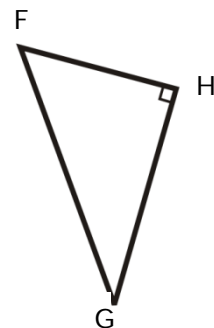


Find $\tan A$.

$$SD=4.8$$

$$DA=3.4$$

10



Find $\tan F$.

$$FH=2.6$$

$$HG=3.8$$

