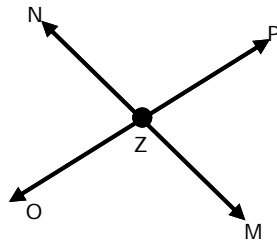


**Basic Geometry Definitions - Guided Lesson**

Complete the following problems:

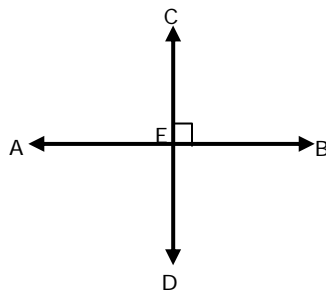
1)



a. Name two angles formed in the figure above.

b. Name the intersecting lines.

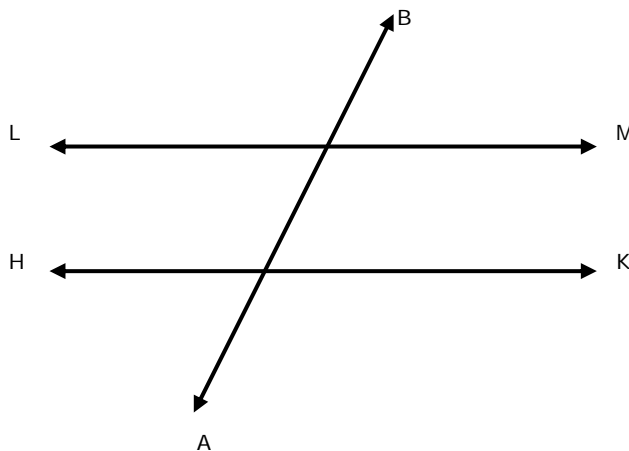
2)



a. Write down the name of perpendicular lines in the diagram.

b. Name two right angles.

3)



a. Name the line that bisects two other lines.

b. Name two parallel lines in the diagram.

