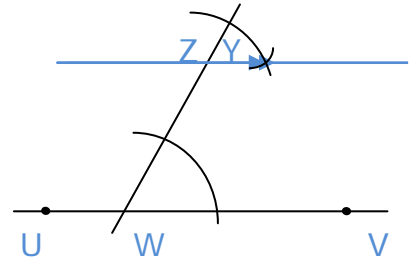
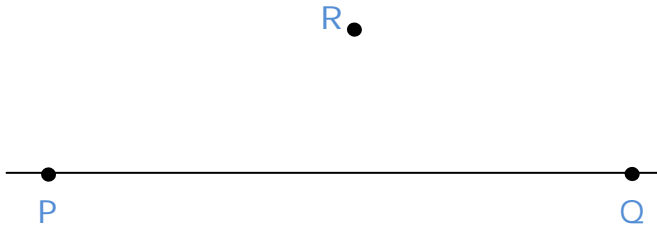


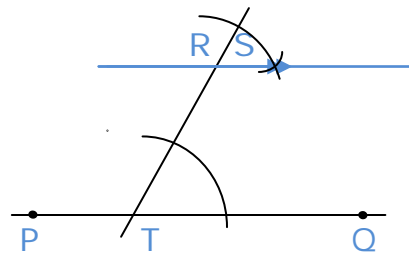
**Making Perpendicular and Parallel Lines - Matching Worksheet**

Write the letter of the answer that matches the problem.

\_\_\_\_\_ 1. Draw a parallel line to line PQ. Start the line with point R. a.



\_\_\_\_\_ 2. Draw a perpendicular line to point V b.



\_\_\_\_\_ 3. Draw a parallel line to line UV. Start the line with point Z. c.

