

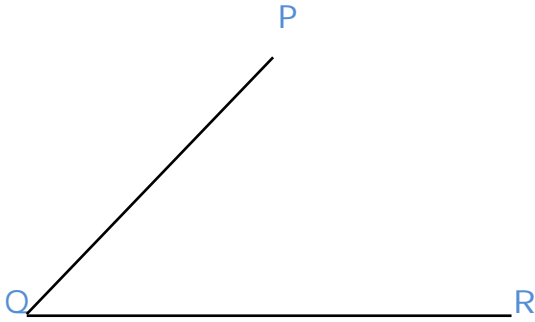
Name _____

Date _____

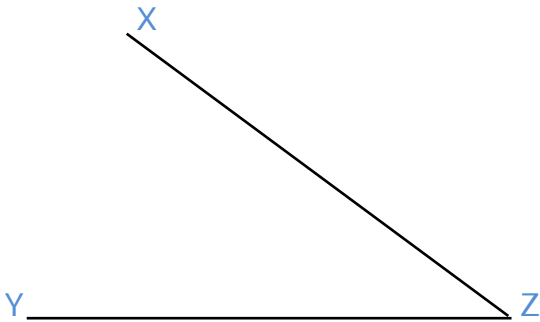
Making Bisectors of Angles and Lines - Independent Practice Worksheet

Complete all the problems. Make sure to make the required drawings.

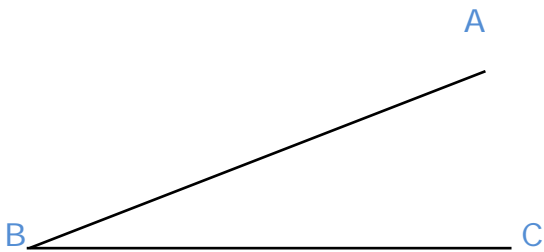
1. Bisect \angle PQR.



2. Bisect \angle XYZ.



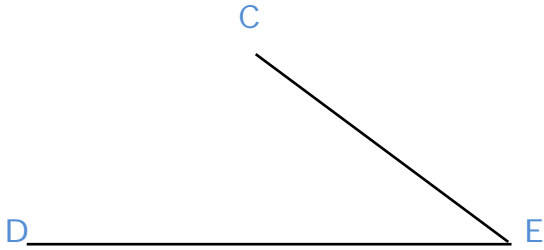
3. Bisect \angle ABC.



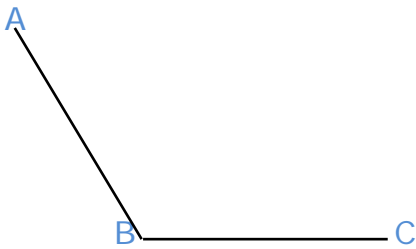
Name _____

Date _____


4. Bisect $\angle CDE$.




5. Bisect $\angle ABC$.



6. Bisect line segment PQ.



7. Bisect line segment AB.



Name _____

Date _____

8. Bisect line segment RS.

R————— S

9. Bisect line segment CD.

C————— D

10. Bisect line segment EF.

E————— F

