

Name _____

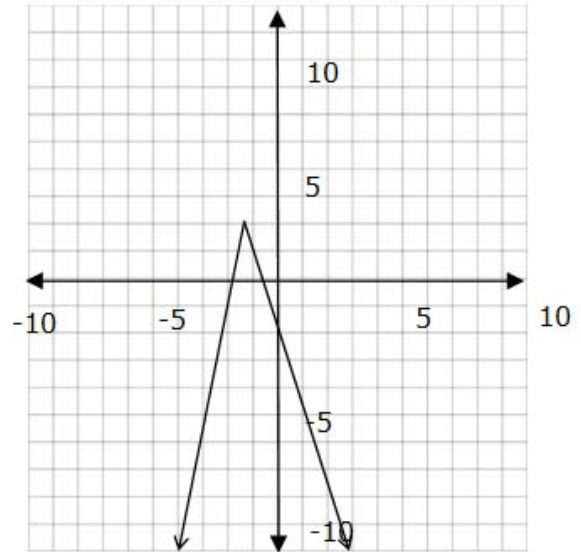
Date _____

Domains and Ranges of Functions - Guided Lesson

Complete the following problems:

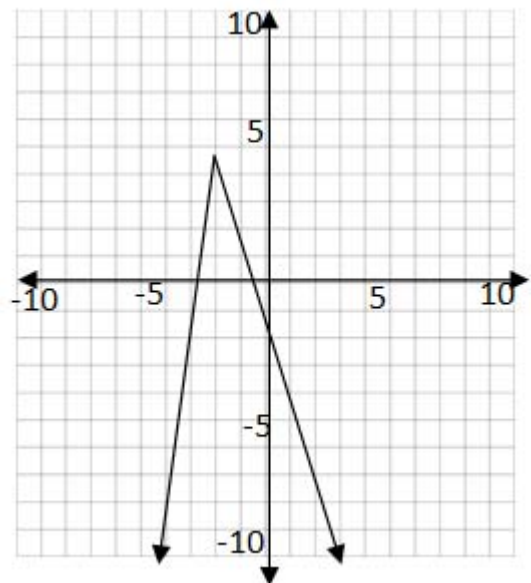
1) What is the range of this function?

- a $\{y \mid y \leq 2\}$
- b $\{y \mid y \geq 2\}$
- c $\{\text{all real numbers}\}$
- d $\{y \mid y < 2\}$



2) What is the range of this function?

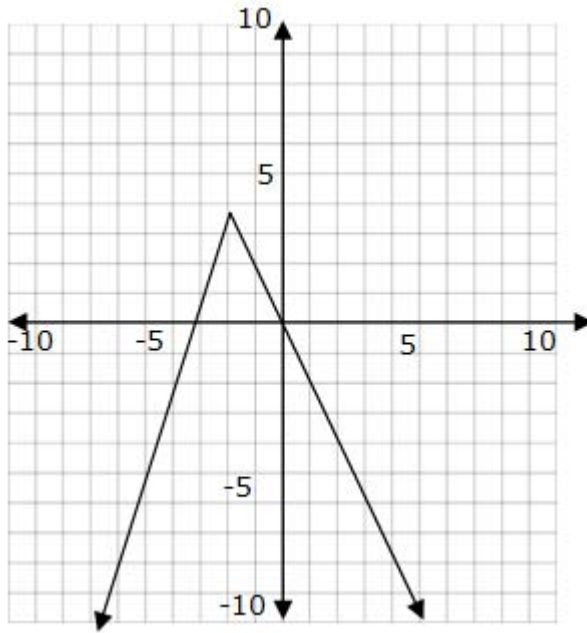
- a $\{y \mid y \geq 4\}$
- b $\{y \mid y \geq 4\}$
- c $\{\text{all real numbers}\}$
- d $\{y \mid y < 4\}$



Name _____

Date _____

3) What is the range of this function?



- a $\{y \mid y \geq 3\}$
- b $\{y \mid y \leq 3\}$
- c {all real numbers}
- d $\{y \mid y < 3\}$

