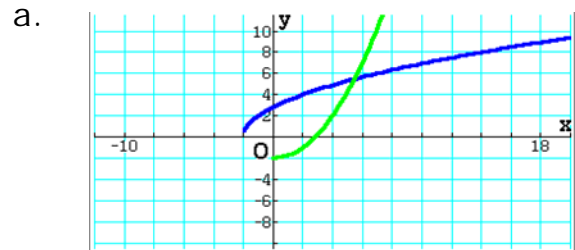


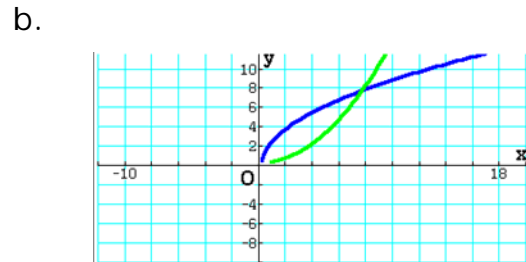
Graphing The Inverse of Functions- Matching Worksheet

Write the letter of the answer that matches the problem.

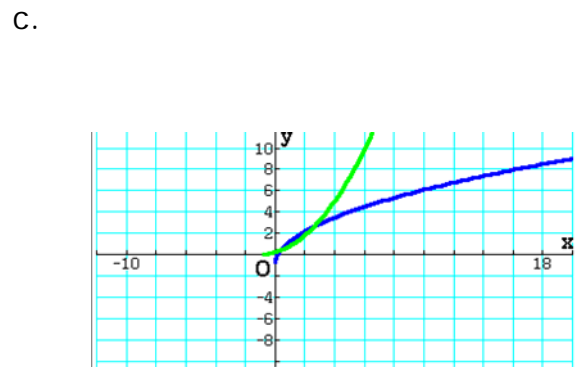
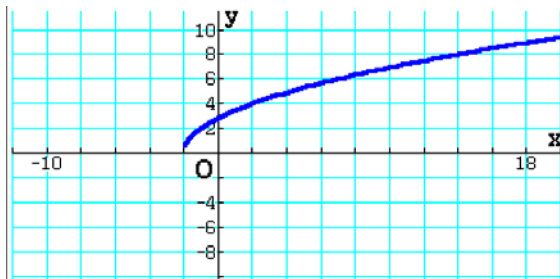
1. Graph the inverse of $f(x) = \sqrt{3x + 2x - 1}$



2. Graph the inverse of $f(x) = \sqrt{x + 9}$



3. Graph the inverse of the function graphed below $f(x) = \sqrt{4x + 8}$



4. Graph the inverse of the function graphed below $f(x) = \sqrt{8x - 2}$

