

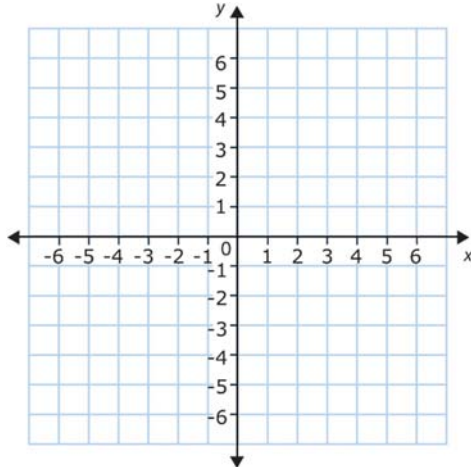
Name _____

Date _____

Determining Linear Equations from Slope and Intercept Practice Worksheet

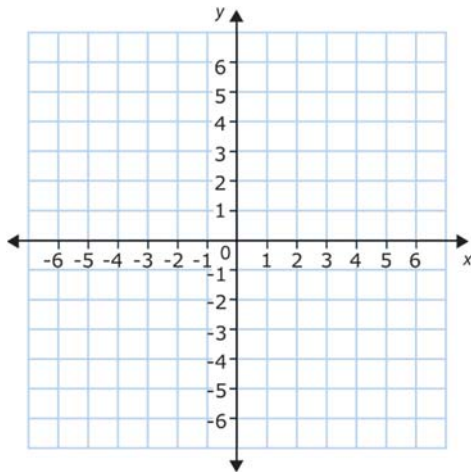
Write the equation and sketch the lines on the graph.

- 1) Slope = $\frac{1}{4}$, y-intercept = -2



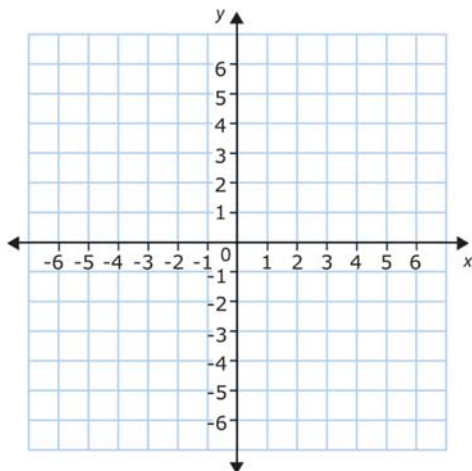
Equation = _____

- 2) Slope = $\frac{1}{2}$, y-intercept = 3



Equation = _____

- 3) Slope = -6, y-intercept = -3



Equation = _____