

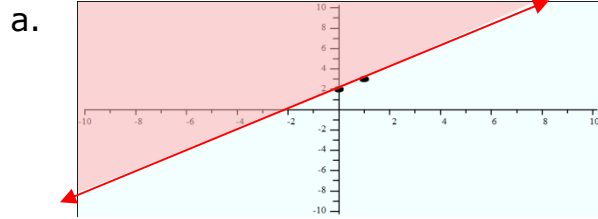
Name _____

Date _____

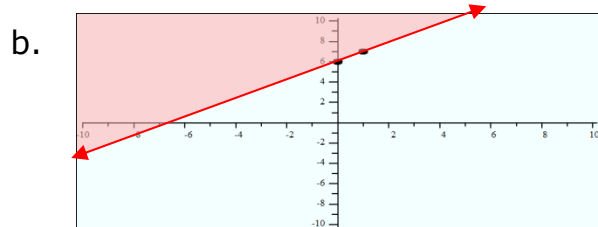
Graphing Linear Inequalities as a Half-Plane - Matching Worksheet

Match the equations to their graph.

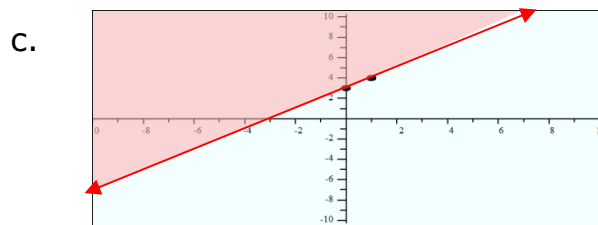
_____ 1. Graph this inequality:
 $y \geq x + 6$



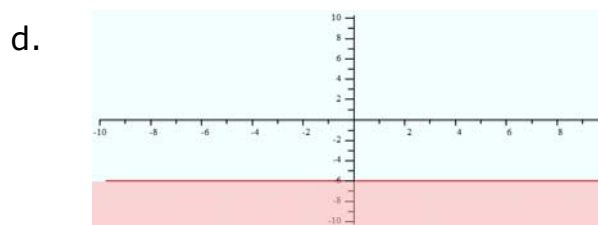
_____ 2. Graph this inequality:
 $y < -4$



_____ 3. Graph this inequality:
 $y \geq x + 2$



_____ 4. Graph this inequality:
 $y < -6$



_____ 5. Graph this inequality:
 $y \geq x + 3$

