

Name \_\_\_\_\_

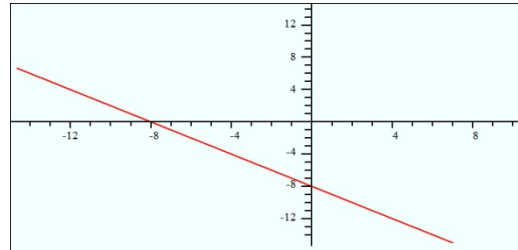
Date \_\_\_\_\_

## Graphing Equations - Matching Worksheet

Match the lines to their equations by using their intercepts.

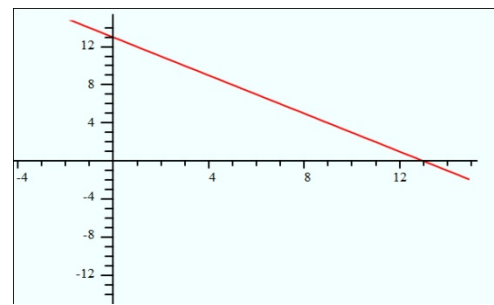
\_\_\_ 1.  $x + y = 12$

a.



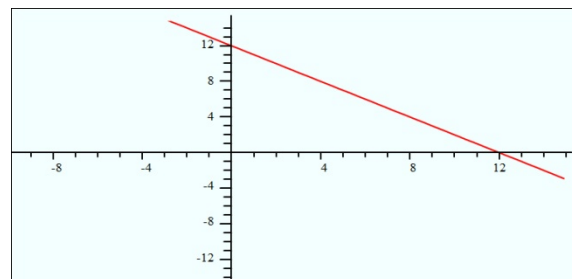
\_\_\_ 2.  $x + y = -8$

b.



\_\_\_ 3.  $x + y = 13$

c.



\_\_\_ 4.  $x + y = 14$

d.

