

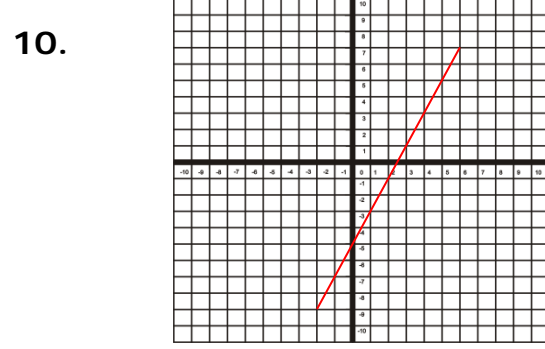
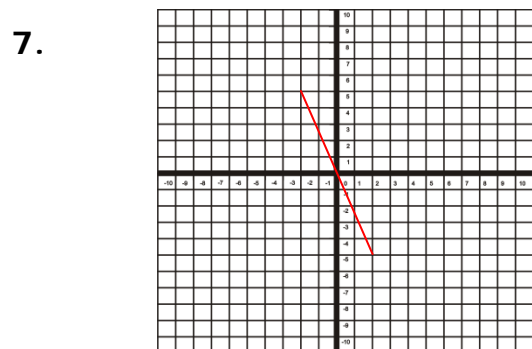
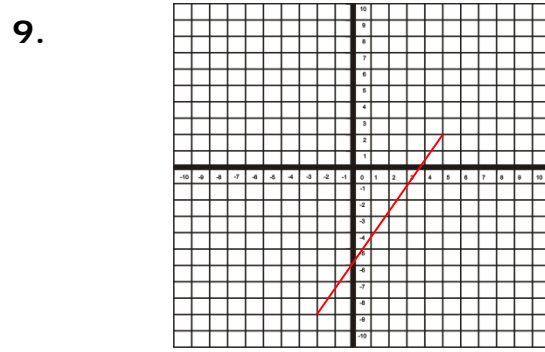
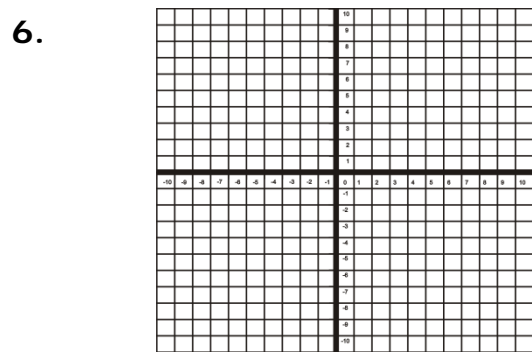
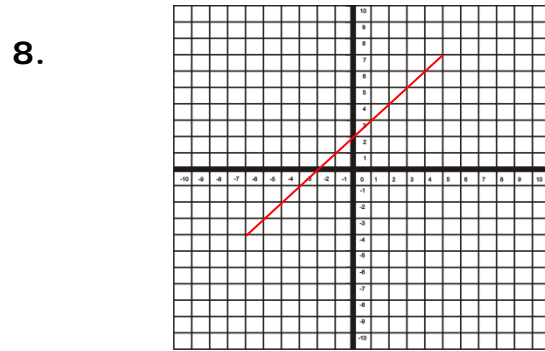
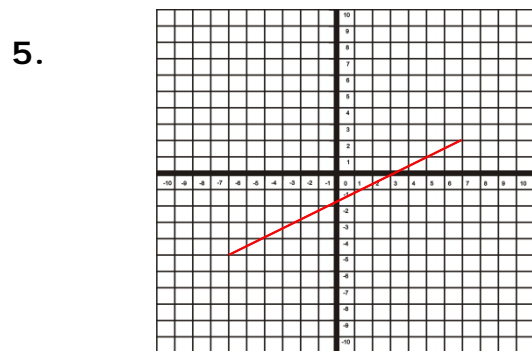
Name: _____

Date _____

Topic : Graphs & Equations of Lines-Worksheet 1

1.	Find the slope of a line passing through the points (2,6) and (8,5)
2.	What is slope of the line $8x + 6y = 30$?
3.	What is slope of the line $10x + 4y = 24$?
4.	What is slope of a line passing through (-6, 2) and (4, 8)?

Write the equations for the following graphs



Name: _____

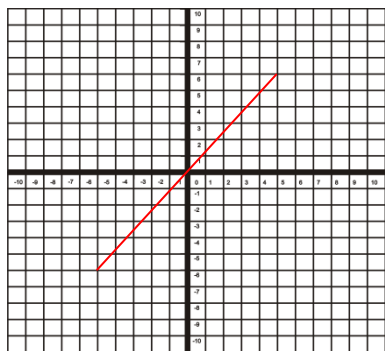
Date _____

Topic : Graphs & Equations of Lines-Worksheet 2

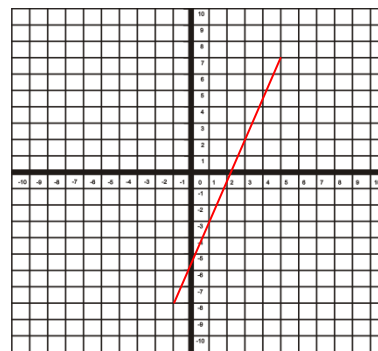
1. Find the slope of a line passing through the points (7,4) and (3,9)
2. What is slope of the line $9x + 7y = 36$?
3. What is slope of the line $2x + 5y = 28$?
4. What is slope of a line passing through (-8, 3) and (6, 5)?

Write the equations for the following graphs

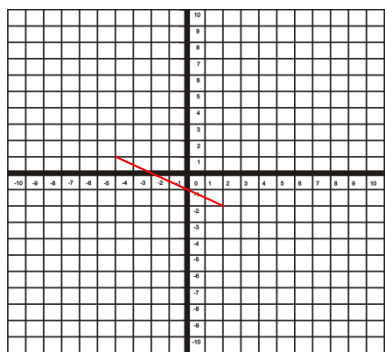
5.



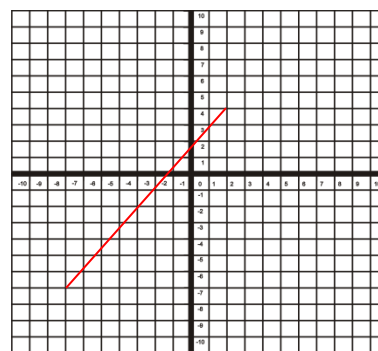
8.



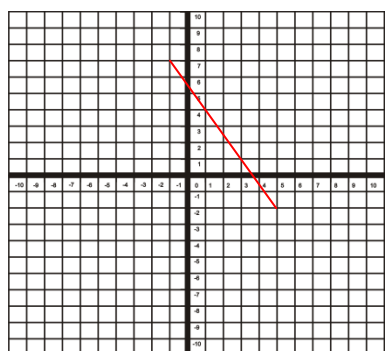
6.



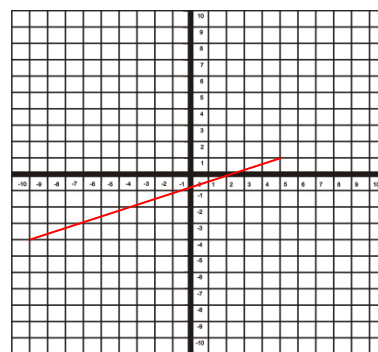
9.



7.



10.



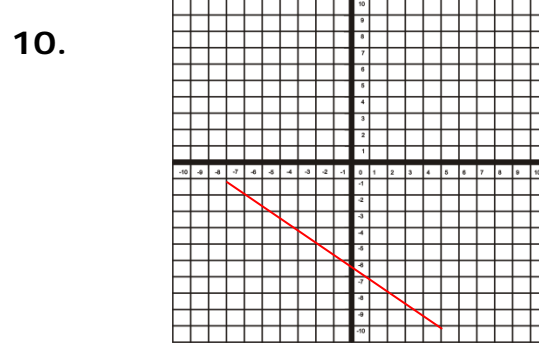
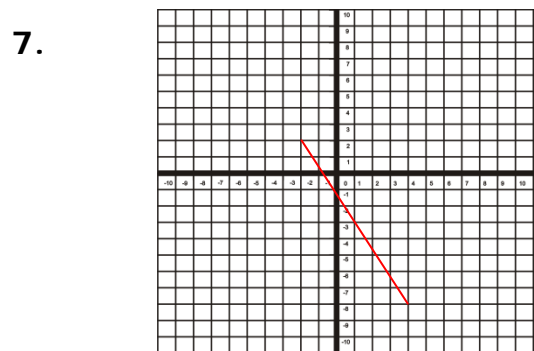
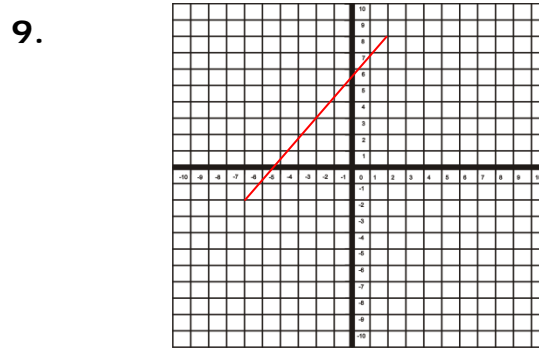
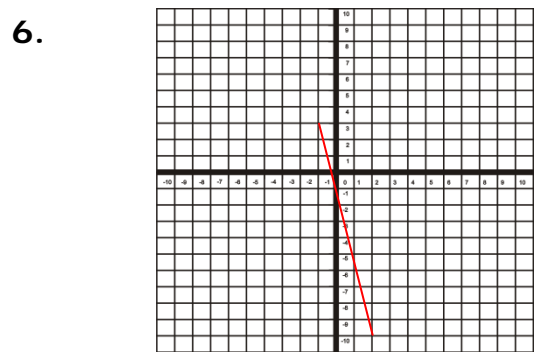
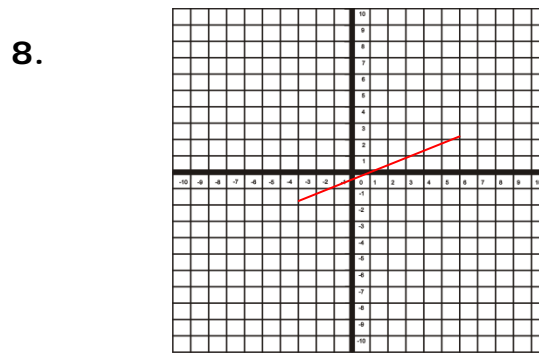
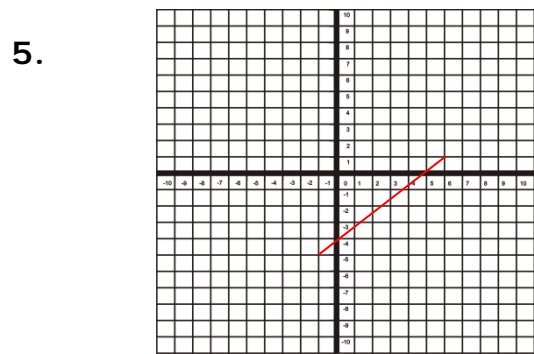
Name: _____

Date _____

Topic : Graphs & Equations of Lines-Worksheet 3

1.	Find the slope of a line passing through the points (8,3) and (5,6)
2.	What is slope of the line $5x + 2y = 25$?
3.	What is slope of the line $9x + 10y = 30$?
4.	What is slope of a line passing through (-6, 3) and (2, 7)?

Write the equations for the following graphs



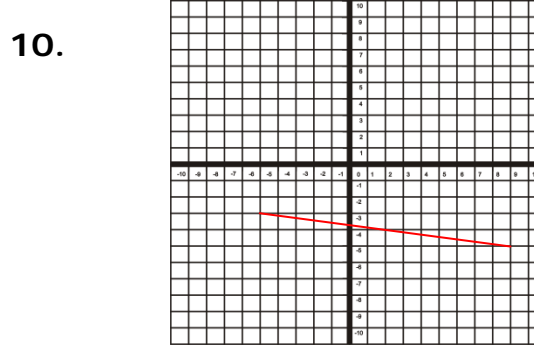
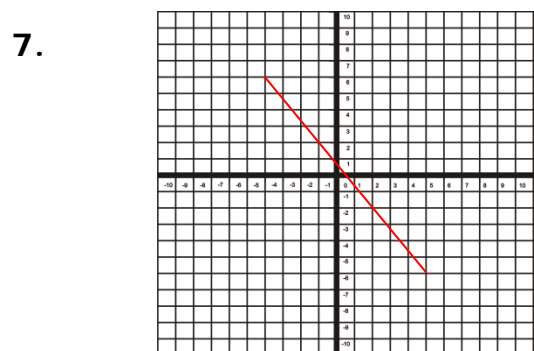
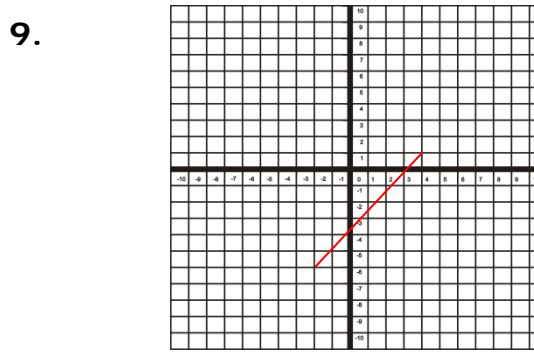
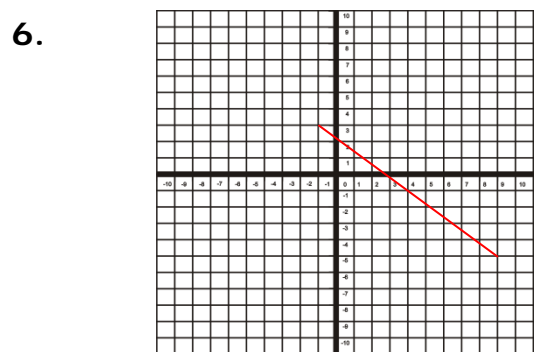
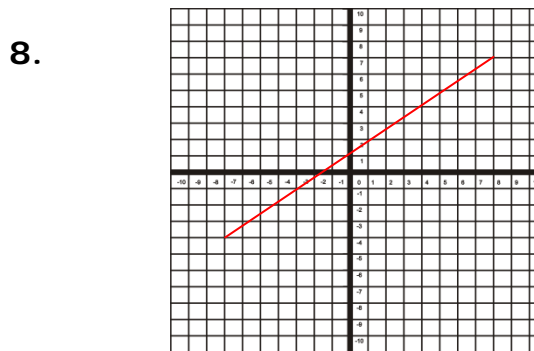
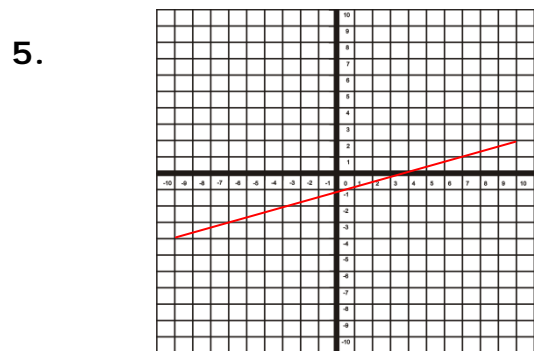
Name: _____

Date _____

Topic : Graphs & Equations of Lines-Worksheet 4

1.	Find the slope of a line passing through the points (3,2) and (7,9)
2.	What is slope of the line $8x + 4y = 22$?
3.	What is slope of the line $5x + 5y = 34$?
4.	What is slope of a line passing through (-4, 9) and (5, 2)?

Write the equations for the following graphs



Name: _____

Date _____

Topic : Graphs & Equations of Lines-Worksheet 5

1.	Find the slope of a line passing through the points (6,4) and (8,3)
2.	What is slope of the line $12x + 5y = 28$?
3.	What is slope of the line $8x + 9y = 35$?
4.	What is slope of a line passing through (-5, 6) and (7, 9)?

Write the equations for the following graphs

