

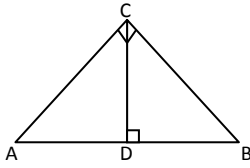
Name: _____

Date _____

Topic: Find Unknown Lengths- Worksheet 1

Do the following:

1.

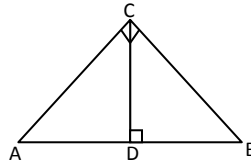


$AD=8$

$CD=3$

Find DB

2.

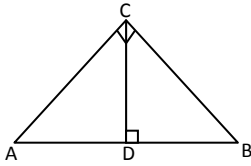


$AB=4$

$CB=3$

Find DB

3.

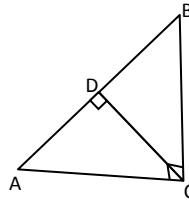


$AD=6$

$DB=6$

Find CD, AC

4.

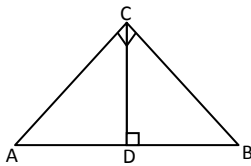


$AB=12$

$CB=6$

Find DB

5.

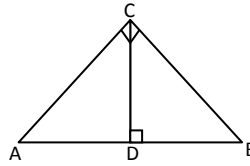


$AB=20$

$CA=12$

Find AD

6.

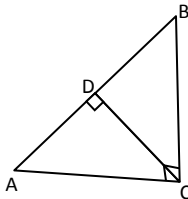


$AD=9$

$CD=4$

Find DB

7.

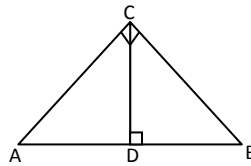


$DB=18$

$CD=7$

Find AD

8.

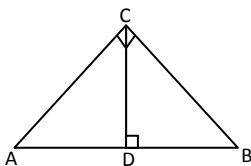


$BD=2$

$CB=9$

Find AB

9.

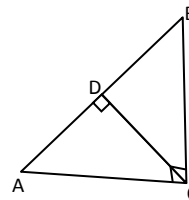


$CA=8$

$AD=2$

Find AB

10.



$AB=24$

$AD=12$

Find CA



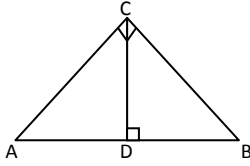
Name: _____

Date _____

Topic: Find Unknown Lengths- Worksheet 2

Do the following:

1.

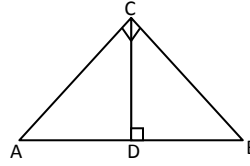


$AD=9$

$DB=2$

Find CD, AC

2.

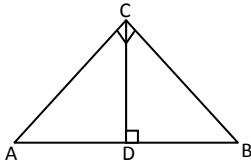


$AD=7$

$CD=4$

Find DB

3.

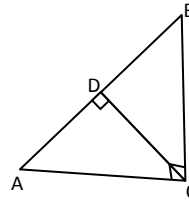


$BD=16$

$CB=5$

Find AB

4.

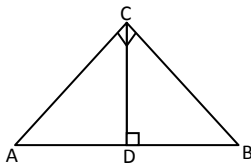


$AB=19$

$CB=7$

Find DB

5.

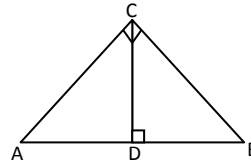


$AB=14$

$CB=8$

Find DB

6.

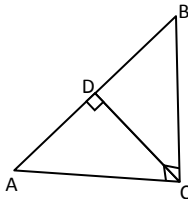


$CA=22$

$AD=10$

Find AB

7.

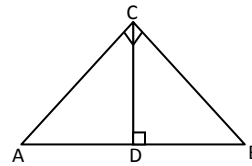


$AD=26$

$CD=11$

Find DB

8.

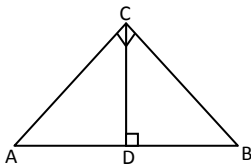


$AB=9$

$CB=4$

Find DB

9.

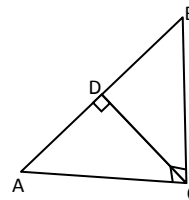


$AB=5$

$AD=3$

Find CA

10.



$CA=14$

$AD=4$

Find AB



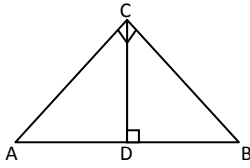
Name: _____

Date _____

Topic: Find Unknown Lengths- Worksheet 3

Do the following:

1.

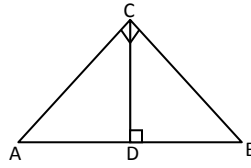


$AD=8$

$CD=6$

Find DB

2.

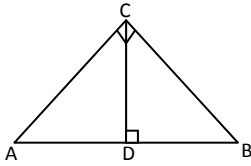


$CA=10$

$AD=2$

Find AB

3.

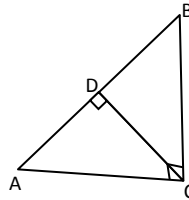


$AB=12$

$CB=9$

Find DB

4.

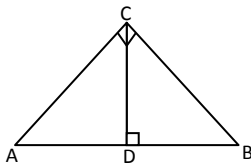


$BD=11$

$CB=5$

Find AB

5.

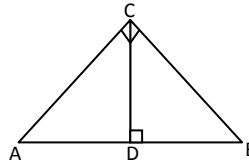


$DB=9$

$CD=4$

Find AD

6.

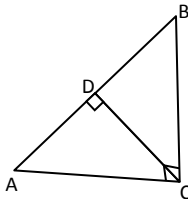


$AB=24$

$CA=8$

Find AD

7.

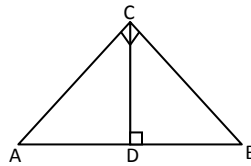


$AB=22$

$DB=4$

Find AC

8.

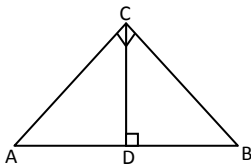


$AB=17$

$AD=2$

Find CA

9.

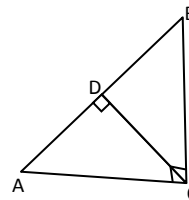


$AB=17$

$CB=5$

Find DB

10.



$DB=23$

$CD=7$

Find AD



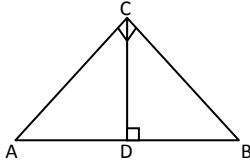
Name: _____

Date _____

Topic: Find Unknown Lengths- Worksheet 4

Do the following:

1.

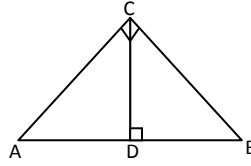


$AB=9$

$AD=2$

Find CA

2.

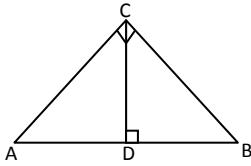


$CA=14$

$AD=3$

Find AB

3.

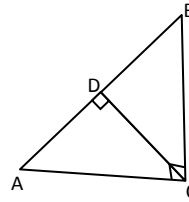


$BD=15$

$CB=7$

Find AB

4.

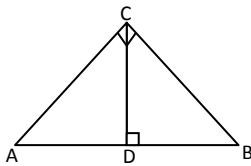


$DB=5$

$CD=7$

Find AD

5.

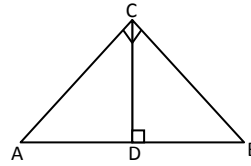


$AD=26$

$CD=14$

Find DB

6.

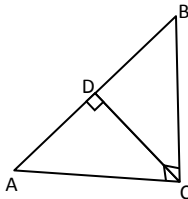


$AB=22$

$CA=7$

Find AD

7.

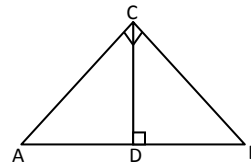


$AB=3$

$CB=12$

Find DB

8.

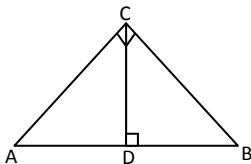


$AD=24$

$DB=7$

Find CD, AC

9.

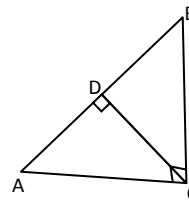


$AB=11$

$CB=9$

Find DB

10.



$AD=5$

$CD=5$

Find DB



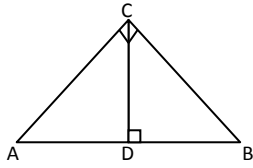
Name: _____

Date _____

Topic: Find Unknown Lengths- Worksheet 5

Do the following:

1.

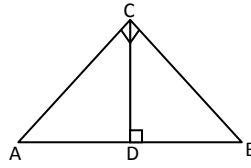


$AB=10$

$CA=5$

Find AD

2.

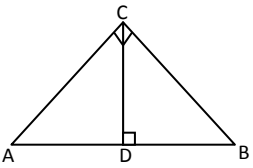


$AB=23$

$AD=4$

Find CA

3.

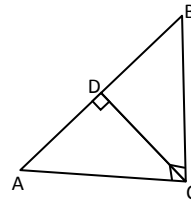


$CA=21$

$AD=6$

Find AB

4.

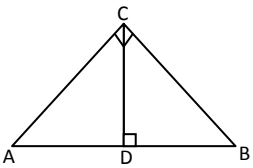


$AB=9$

$CB=16$

Find DB

5.

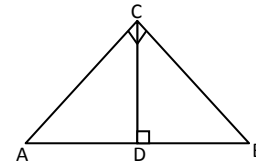


$AD=12$

$CD=13$

Find DB

6.

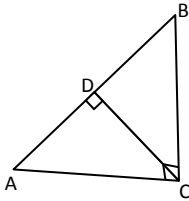


$BD=14$

$CB=8$

Find AB

7.

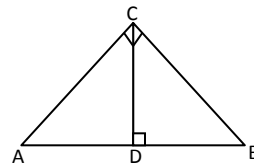


$AB=28$

$CB=7$

Find DB

8.

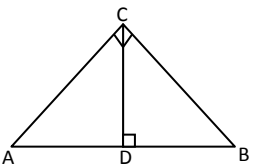


$AD=5$

$CD=6$

Find DB

9.

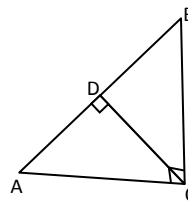


$AD=9$

$DB=2$

Find CD, AC

10.



$AB=9$

$CB=4$

Find DB

