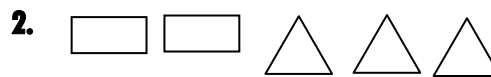
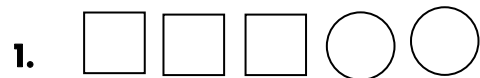


Name: _____

Date _____

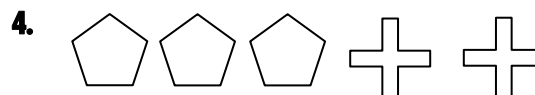
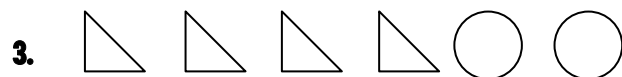
Topic : Rewriting Ratios- Worksheet 1

Write the following ratios.



Squares to circles.

Rectangles to triangles.



Triangles to total number of figures.

Pentagons to crosses.



Rectangles to circles.

Circles to total number of figures.

7.

25 yellow marbles and 15 black marbles.

The The ratio of black marbles to yellow marbles..

8.

6 violet marbles and 9 pink marbles.

The The ratio of violet marbles to pink marbles.

9.

15 blue marbles and 20 orange marbles.

The The ratio of orange marbles to blue marbles.

10.

3 red marbles and 8 black marbles.

The The ratio of black marbles to red marbles.



Name: _____

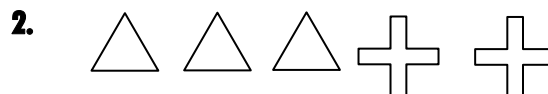
Date _____

Topic : Rewriting Ratios- Worksheet 2

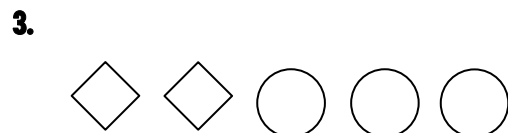
Write the following ratios.



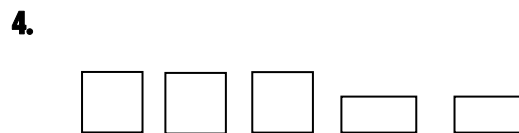
Pentagon to circles.



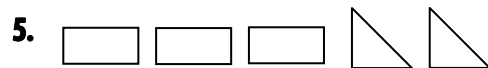
Triangles to crosses.



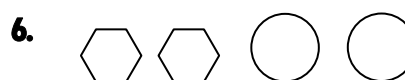
Rhombuses to total number of figures.



Squares to rectangles.



Rectangles to triangles.



Hexagon to total number of figures.

7.

45 pink marbles and 12 white marbles

The ratio of pink marbles to white marbles

8.

10 red marbles and 18 pink marbles

The ratio of red marbles to pink marbles

9.

21 blue marbles and 56 black marbles

The ratio of black marbles to blue marbles

10.

8 purple marbles and 28 black marbles

The ratio of black marbles to purple marbles



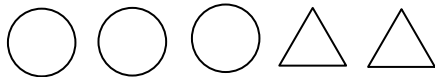
Name: _____

Date _____

Topic : Rewriting Ratios- Worksheet 3


Write the following ratios.

1.




Circles to triangles.

3.



Triangles to total number of figures.

5.



Squares to hexagons.

7.

33 orange marbles and 18 white marbles

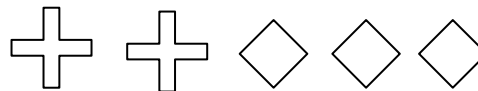
The ratio of orange marbles to white marbles

9.

85 white marbles and 58 black marbles

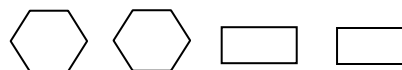
The ratio of black marbles to white marbles

2.



Crosses to rhombuses.

4.



Hexagon to rectangles.

6.



Circles to total number of figures.

8.

38 blue marbles and 22 pink marbles

The ratio of blue marbles to pink marbles

10.

7 yellow marbles and 25 black marbles

The ratio of black marbles to yellow marbles



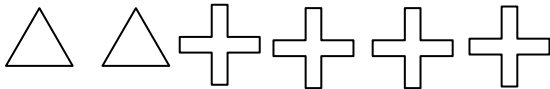
Name: _____

Date _____

Topic : Rewriting Ratios- Worksheet 4

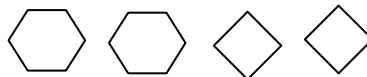
Write the following ratios.

1.



Triangles to crosses.

2.




Hexagon to rhombuses.

3.



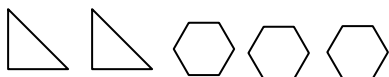
Write the The ratio of the figures.

4.



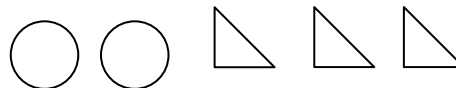
Cirdes to rectangles.

5.



Triangles to hexagons.

6.



Write the The ratio of the figures.

7.

41 Red marbles and 78 white marbles

The ratio of red marbles to white marbles

8.

75 blue marbles and 66 yellow marbles

The ratio of blue marbles to yellow marbles

9.

55 purple marbles and 32 black marbles

The ratio of black marbles to purple marbles

10.

10 green marbles and 32 black marbles

The ratio of black marbles to green marbles



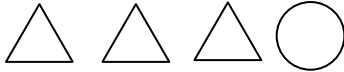
Name: _____

Date _____

Topic : Rewriting Ratios- Worksheet 5

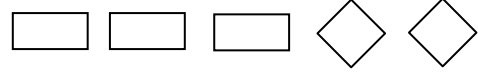
Write the following ratios.

1.



Triangles to circles.

2.



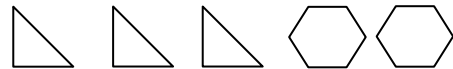
Rectangles to rhombuses.

3.



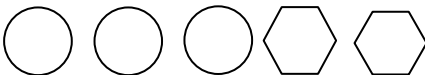
Hexagon to total number of figures.

4.



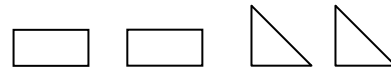
Triangles to hexagons.

5.



Circles to hexagons.

6.



Rectangles to total number of figures.

7.

48 Green marbles and 22 red marbles

The ratio of green marbles to red marbles

8.

15 yellow marbles and 52 blue marbles

The ratio of yellow marbles to blue marbles

9.

14 purple marbles and 17 white marbles

The ratio of white marbles to purple marbles

10.

35 purple marbles and 32 black marbles

The ratio of black marbles to purple marbles

