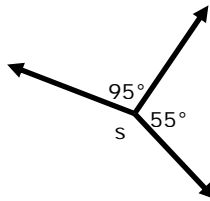


## Angles in a Multi-Step Problems - Matching Worksheet

Match the problems to their answers. Write the letter of the answer that matches the problem.

1. What is the value of  $s$ ?

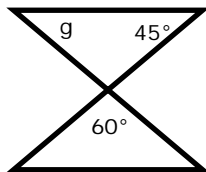
\_\_\_\_\_



a.  $75^\circ$

2. Find the measure of angle  $g$ .

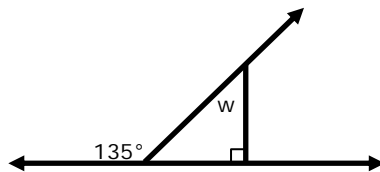
\_\_\_\_\_



b.  $100^\circ$

3. Find the measure of angle  $w$ .

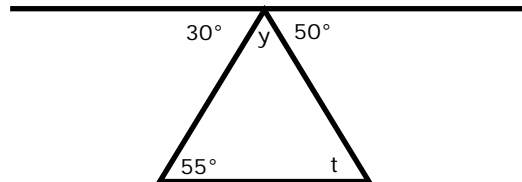
\_\_\_\_\_



c.  $210^\circ$

4. Find the measure of angle  $y$ .

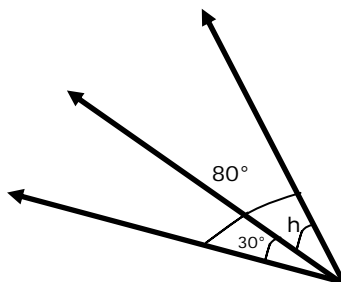
\_\_\_\_\_



d.  $50^\circ$

5. What is the value of  $h$ ?

\_\_\_\_\_



e.  $45^\circ$

