

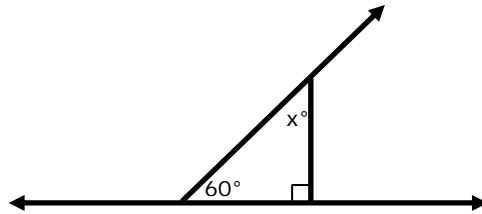
Name _____

Date _____

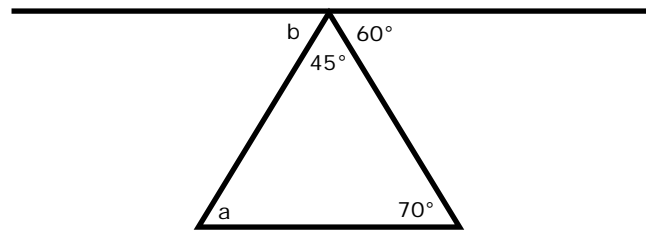
Angles in a Multi-Step Problems - Independent Practice Worksheet

Complete all the problems.

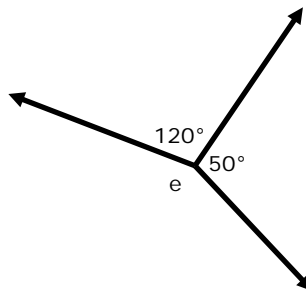
1. Write and solve an equation to find the measure of angle x .



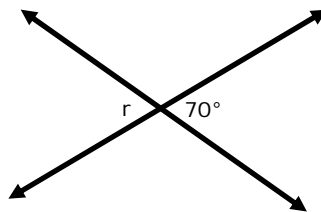
2. Find the measure of angle b .



3. What is the value of e ?



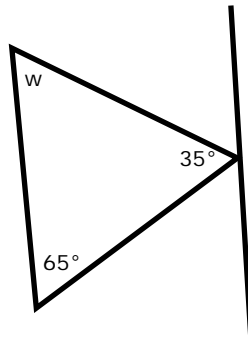
4. What is the value of r ?



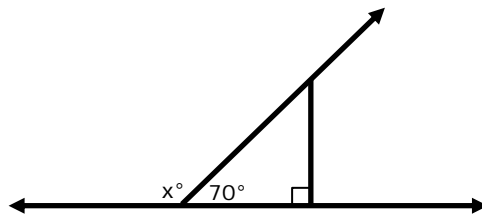
Name _____

Date _____

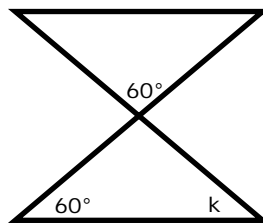
5. Find the measure of angle w .



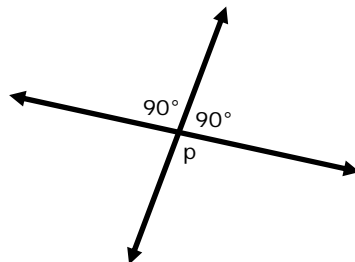
6. Find the measure of angle w .



7.) Find the measure of angle k .



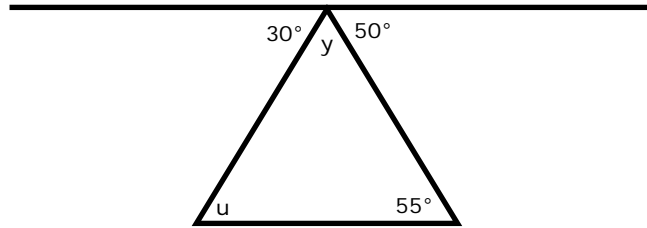
8. What is the value of p ?



Name _____

Date _____

9. Find the measure of angle y .



10. Find the measure of angle h .

