

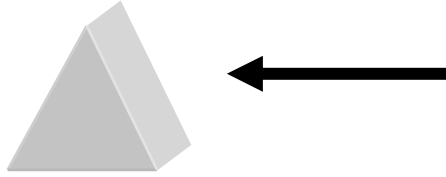
Name _____

Date _____

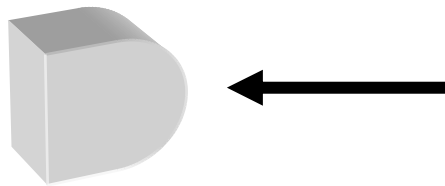
Decomposing Three-Dimensional Figures - Independent Practice Worksheet

Solve all the problems.

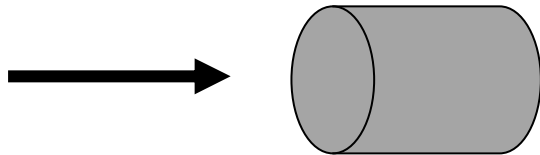
1. If you were to view the shape from the right, what would you see?



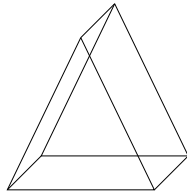
2. If you were to view the shape from the right, what would you see?




3. If you were to view the shape from the left, what would you see?



4. If you were to view the shape from the bottom, what would you see?



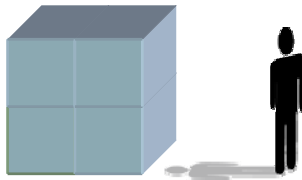
5. If you were to view the shape from the bottom, what would you see?




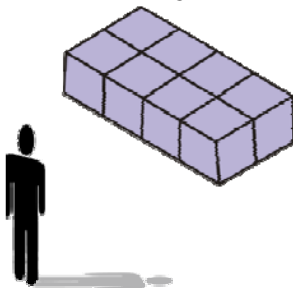
Name _____

Date _____


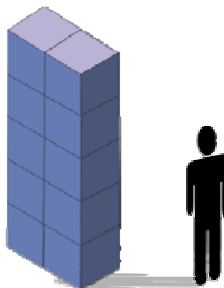
6. Look at this object from the right, what will you see?



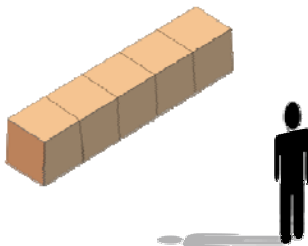
7. Look at this object from the left, what will you see?



8. Look at this object from the top, what will you say?



9. Look at this object from the side, what will you see?



10. Look at this object from the left, what will you say?

