

Name: _____


Date _____

Topic : Visual Expressions-Worksheet 1


Write the numerical expression for the models.

Let one green star equal +2 and one blue star equal -2.

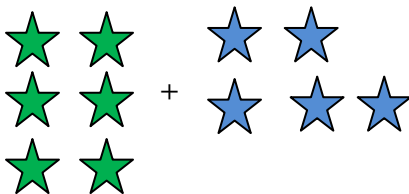
1.



2.



3.



4.



5.



6.



7. Use a number line to solve the equation. $15 + (-10)$

8. What integer is represented by 30 positive tiles and 10 negative tiles?

9. Use a number line to solve the equation. $5 - (-5)$

10. What integer is represented by 80 positive tiles and 30 negative tiles?




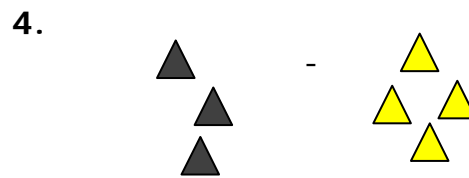
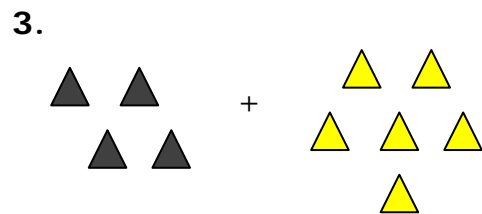
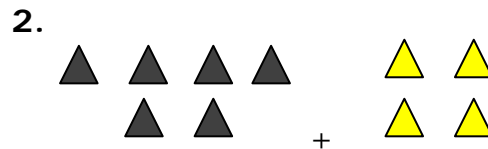
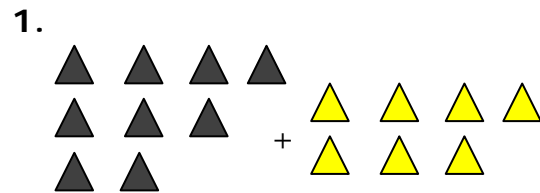
Name: _____

Date _____

Topic : Visual Expressions-Worksheet 2

Write the numerical expression for the models.

Let one black triangle equal +1 and one yellow triangle equal -2.



7. Use a number line to solve the equation. $13 + (-7)$

8. What integer is represented by 40 positive triangles and 25 negative triangles?

9. Use a number line to solve the equation. $9 - (-5)$

10. What integer is represented by 60 positive triangles and 20 negative triangles?



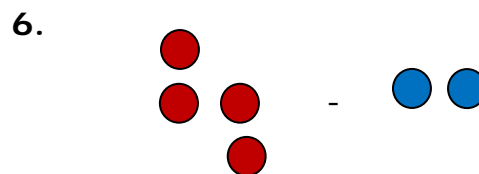
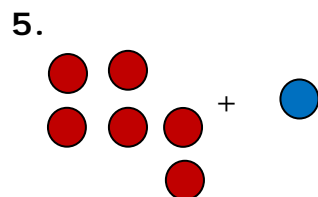
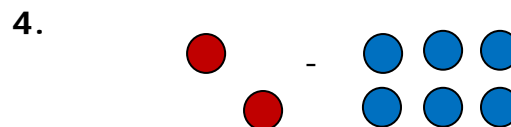
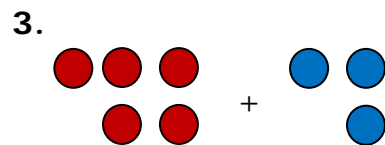
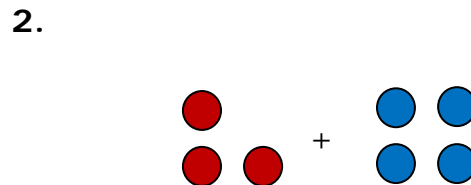
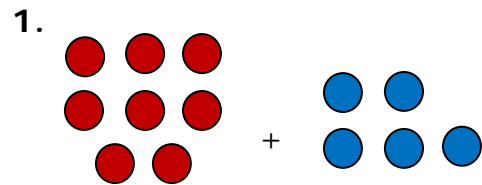
Name: _____

Date _____

Topic : Visual Expressions-Worksheet 3

Write the numerical expression for the models.

Let one red circle equal +2 and one blue circle equal -1.



7. Use a number line to solve the equation. $8 + (-2)$

8. What integer is represented by 85 positive triangles and 35 negative triangles?

9. Use a number line to solve the equation. $7 - (-5)$

10. What integer is represented by 55 positive triangles and 25 negative triangles?



Name: _____

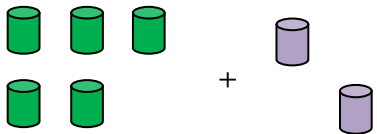
Date _____

Topic : Visual Expressions-Worksheet 4

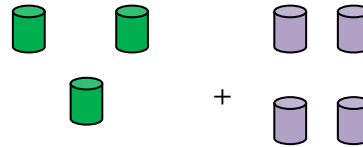
Write the numerical expression for the models.

Let one green can equal +3 and one purple can equal -2.

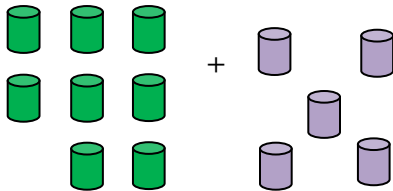
1.



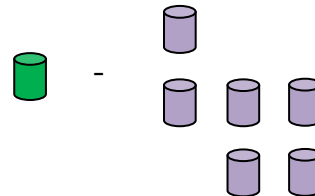
2.



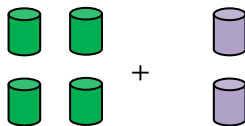
3.



4.



5.



6.



7. Use a number line to solve the equation. $5 + (-2)$

8. What integer is represented by 90 positive triangles and 18 negative triangles?

9. Use a number line to solve the equation. $10 - (-1)$

10. What integer is represented by 78 positive triangles and 28 negative triangles?



Name: _____

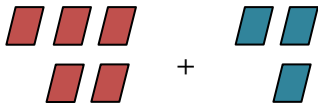
Date _____

Topic: Visual Expressions-Worksheet 5

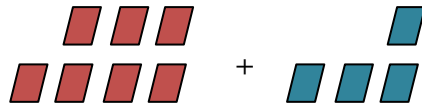
Write the numerical expression for the models.

Let one red can equal +2 and one blue can equal -3.

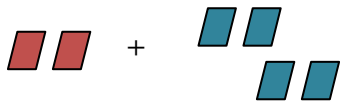
1.



2.



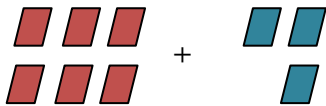
3.



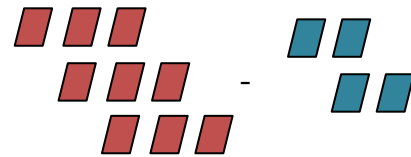
4.



5.



6.



7. Use a number line to solve the equation. $15 + (-7)$

8. What integer is represented by 44 positive triangles and 20 negative triangles?

9. Use a number line to solve the equation. $13 - (-2)$

10. What integer is represented by 57 positive triangles and 22 negative triangles?

