

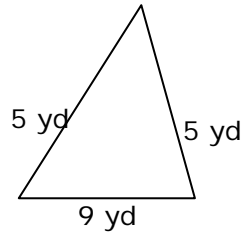
Name \_\_\_\_\_

Date \_\_\_\_\_

### Finding the Perimeter of Odd Shapes - Matching Worksheet

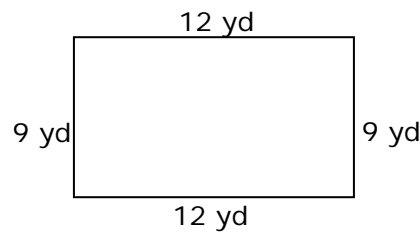
Match the **perimeter** of the shapes to their answers. Write the letter of the answer that matches the shape.

1.  
\_\_\_\_\_



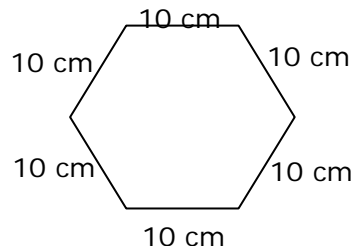
a. 39 cm

2.  
\_\_\_\_\_



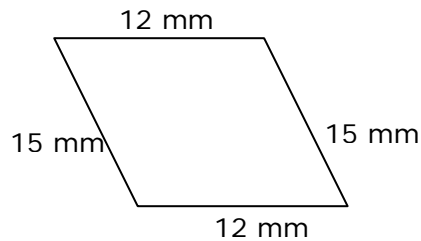
b. 19 yards

3.  
\_\_\_\_\_



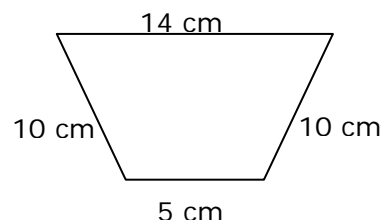
c. 54 mm

4.  
\_\_\_\_\_



d. 42 yards

5.  
\_\_\_\_\_



e. 60 cm

