

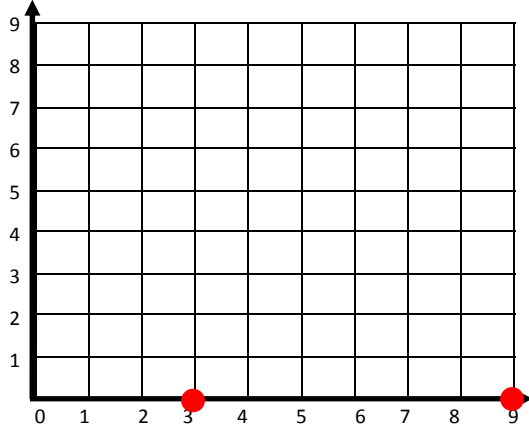
Name _____

Date _____

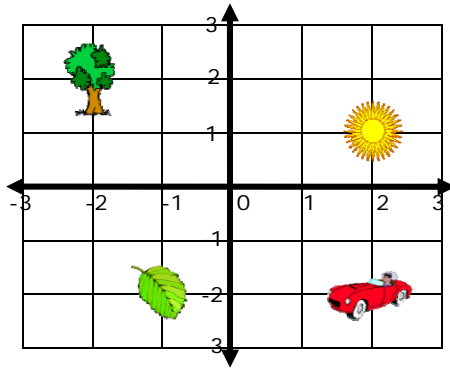
Solve Real World And Mathematical Problems By Graphing - Independent Practice

Complete all the problems.

1. Find the distance between (0, 3) and (0, 9).



2.



Car



Leaf



Tree



Sun

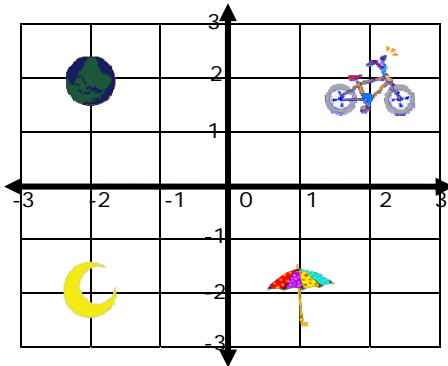
Gordon walks from the Leaf to the Tree and then to the Sun. How many blocks did he walk?



Name _____

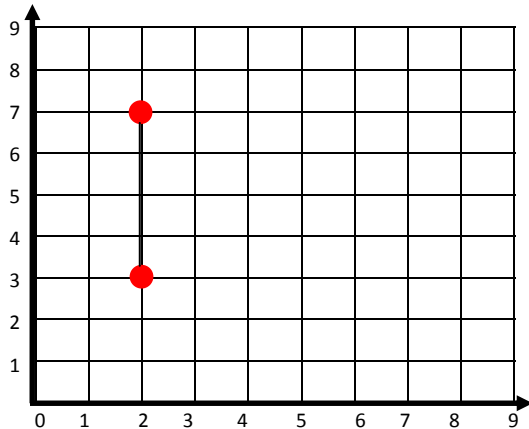
Date _____

3.

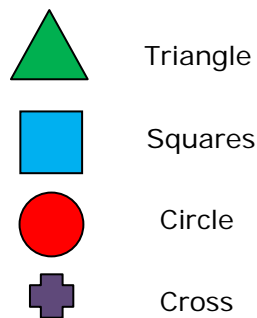
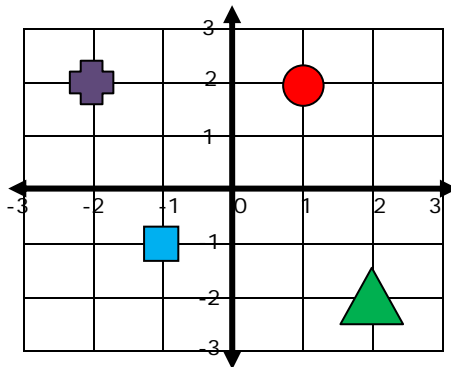


Aylin walks from the Bicycle to the Umbrella and then to the Moon. How many blocks did she walk?

4. Find the distance between $(2, 3)$ and $(2, 7)$.



5.



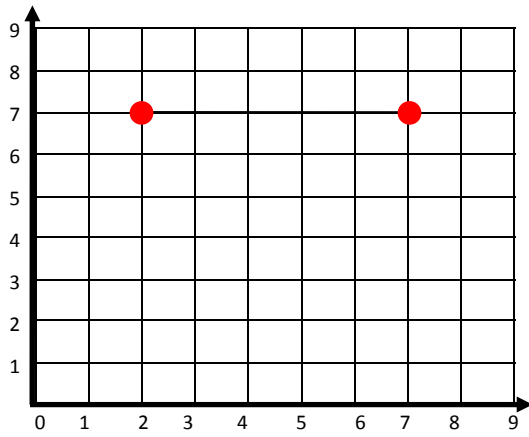
How far is the Circle from the Triangle?



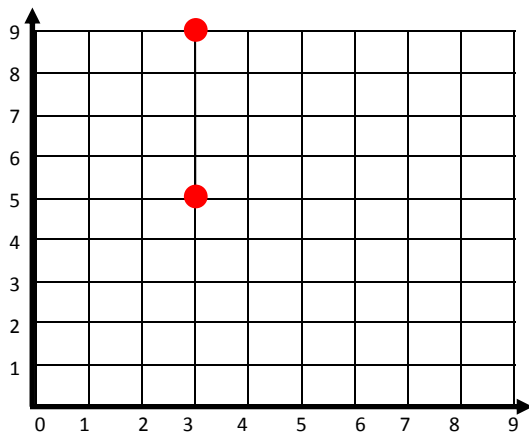
Name _____

Date _____

6. Find the distance between $(2, 7)$ and $(7, 7)$.



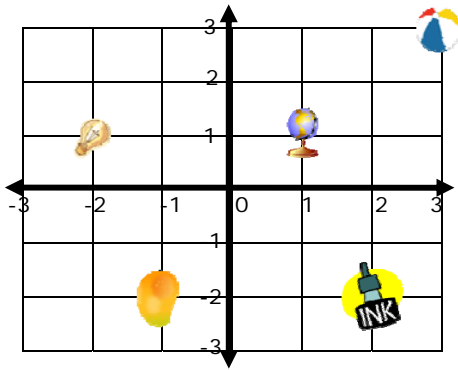
7. Find the distance between $(2, 5)$ and $(2, 9)$.



Name _____

Date _____

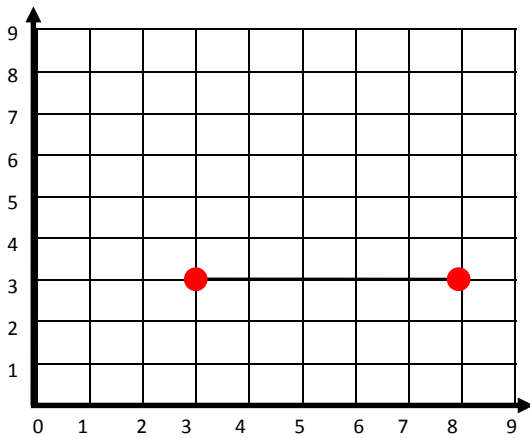
8.



-  Mango
-  Globe
-  Ball
-  Bulb
-  Ink

How far is the Bulb from the Ball?

9. Find the distance between $(4, 3)$ and $(8, 3)$.



10. Find the distance between $(3, 2)$ and $(9, 2)$.

