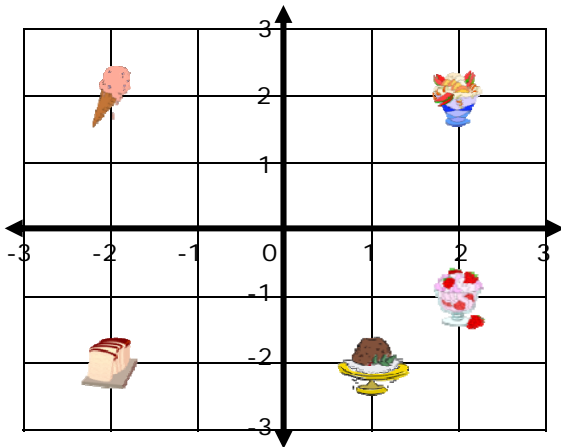


Name _____

Date _____

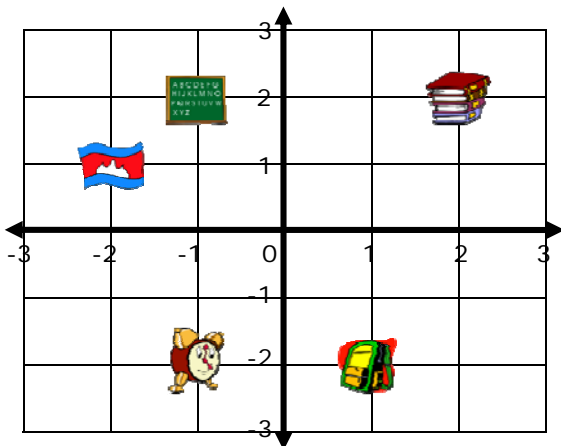
Solve Real World And Mathematical Problems By Graphing - Guided Lesson

Complete the following problems. The coordinate system is marked in units of city blocks.



-  Ice Cream
-  Fruit Trifle
-  White Bread
-  Strawberry Chantilly
-  Rich Chocolate

1) How many blocks is the Fruit Trifle from the Rich Chocolate?




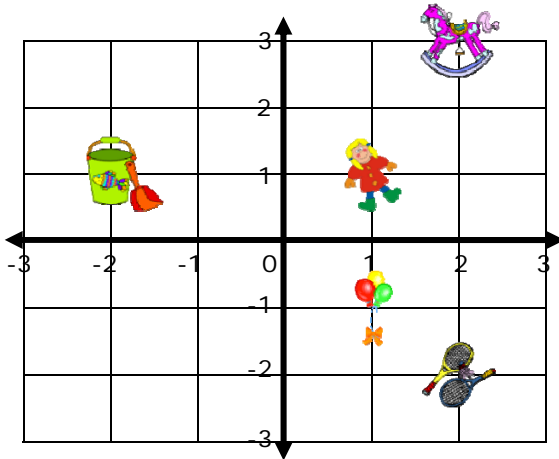
-  Books
-  Chalk Board
-  Flag
-  Clock
-  Bag

2) How far is the Flag from the Books?



Name _____

Date _____



3) Jack walks from the Balloon to the Doll and then to the Toy horse. How many blocks did he walk?

