

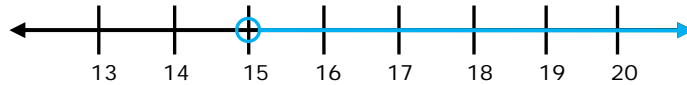
Name _____

Date _____

Inequalities and Numbers Lines - Matching Worksheet

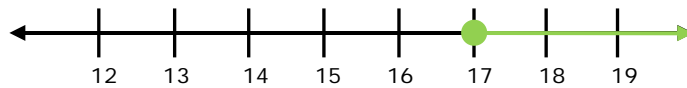
Match the number line to the correct answer. Write the letter of the answer that matches the number line.

_____ 1. What inequality does this number line show?



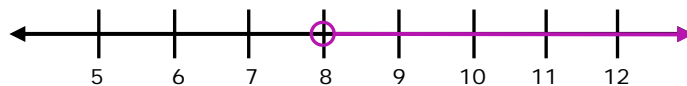
a. $x > 23$

_____ 2. What inequality does this number line show?



b. $x > 20$

_____ 3. What inequality does this number line show?



c. $x > 15$

_____ 4. What inequality does this number line show?



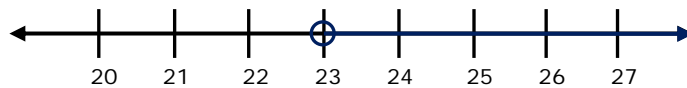
d. $x \geq 17$

_____ 5. What inequality does this number line show?



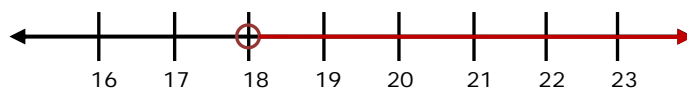
e. $x > 18$

_____ 6. What inequality does this number line show?



f. $x \geq 23$

_____ 7. What inequality does this number line show?



g. $x > 8$

