

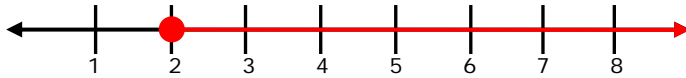
Name \_\_\_\_\_

Date \_\_\_\_\_

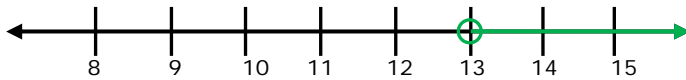
## Inequalities and Numbers Lines - Independent Practice Worksheet

Complete all the following questions.

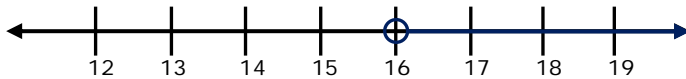
1. What inequality does this number line show?



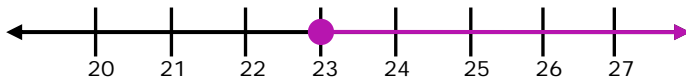
2. What inequality does this number line show?



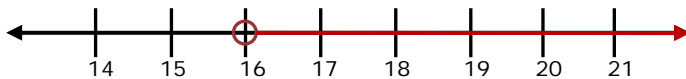
3. What inequality does this number line show?



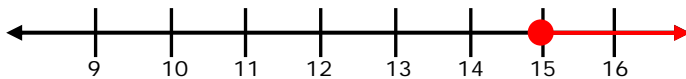
4. What inequality does this number line show?



5. What inequality does this number line show?



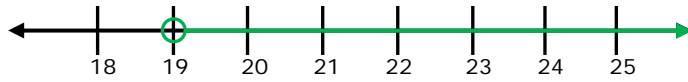
6. What inequality does this number line show?



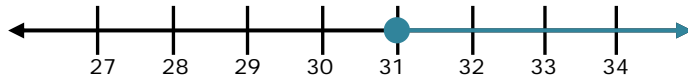
Name \_\_\_\_\_

Date \_\_\_\_\_

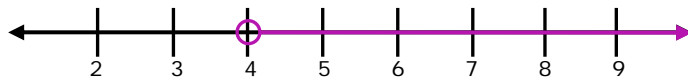
7. What inequality does this number line show?



8. What inequality does this number line show?



9. What inequality does this number line show?



10. What inequality does this number line show?

