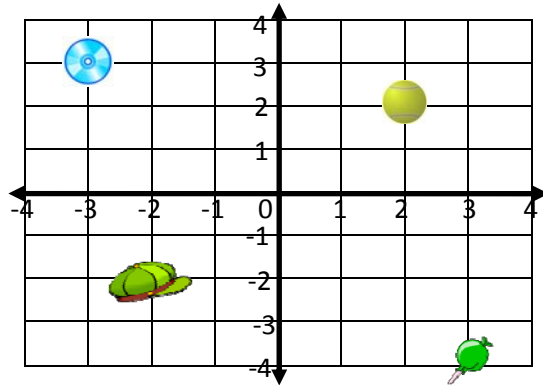


Coordinate Graphing and Position - Matching Worksheet

Match the word problems to their answers. Write the letter of the answer that matches the problem.

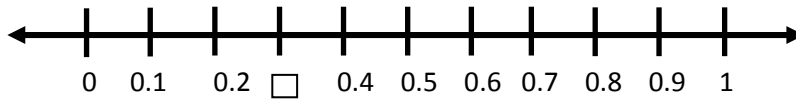
_____ 1. What quadrant is point (3,-4) located in?

a. .3



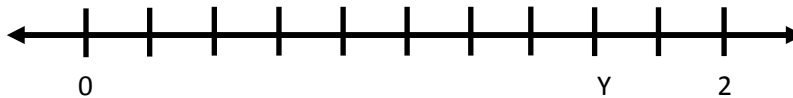
_____ 2. Find the missing value. Write your answer as a decimal number.

b. 



_____ 3. Find the value of Y. Write your answer as a decimal number.

c. 



_____ 4. What quadrant is point (-3,-1) located in?

d. 1.6

