

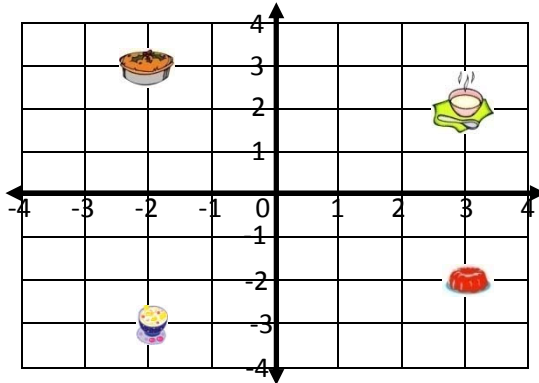
Name _____

Date _____

Coordinate Graphing and Position - Guided Lesson

Complete the following problems:

1. What is at (3,2)?



Jelly



Yoghurt

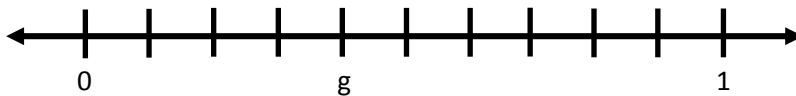


Paradise

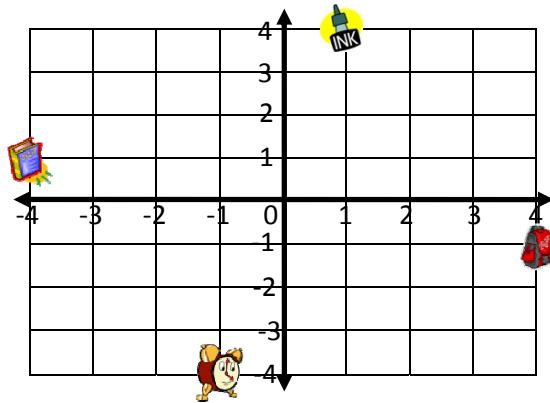


Oatmeal

2. Find the value of g. Write your answer as a decimal number.



3. What is at (-4,1)?



Bag



Book



Ink



Clock

